

Worksheet

11/09/2019

Free on dw-math.com

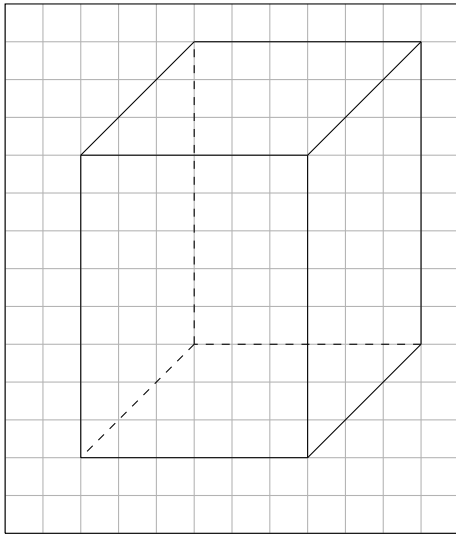
Problem quickname: 1443

1)

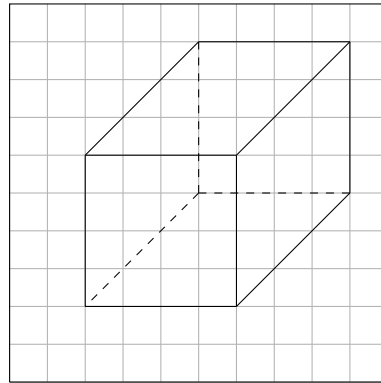
Complete the shape by drawing the missing invisible lines. Use a dotted or dashed line.

Quick:
1443

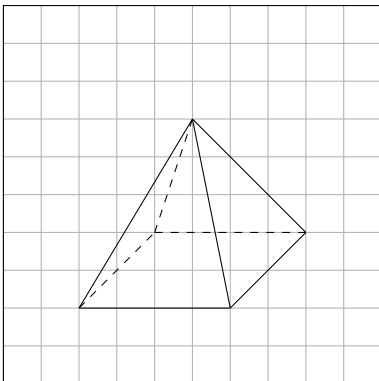
a) Shape: A cuboid



b) Shape: A cuboid



c) Shape: A pyramid



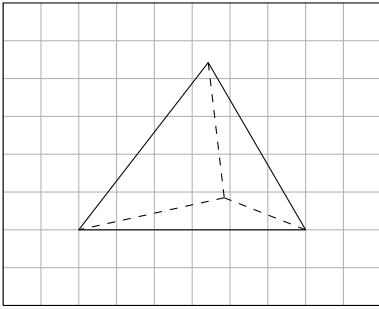
2)

Complete the shape by drawing the missing invisible lines. Use a dotted or dashed line.

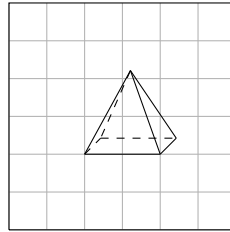
Quick:
1443

line.

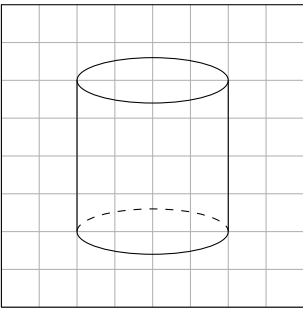
a) Shape: A tetrahedron



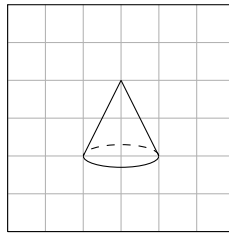
b) Shape: A pyramid



c) Shape: A cylinder



d) Shape: A cone

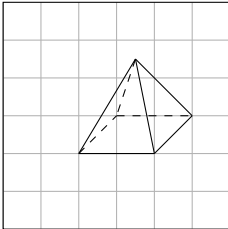


3)

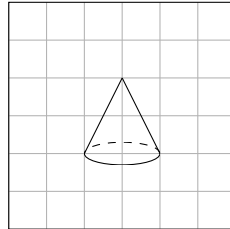
Complete the shape by drawing the missing invisible lines. Use a dotted or dashed line.

Quick:
1443

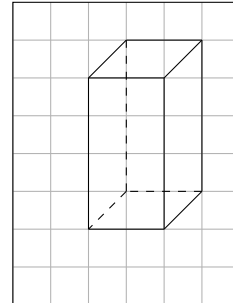
a)



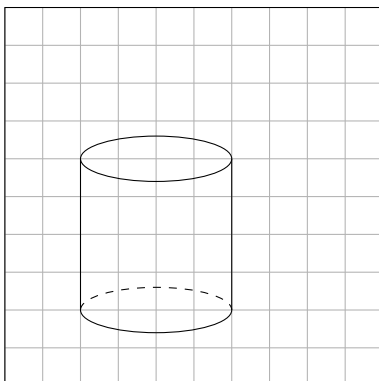
b)



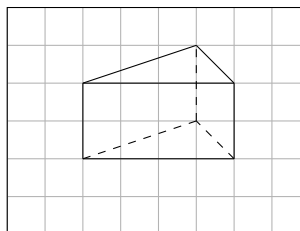
c)

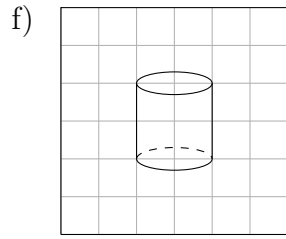


d)



e)

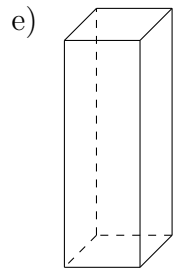
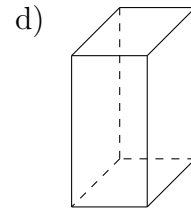
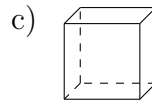
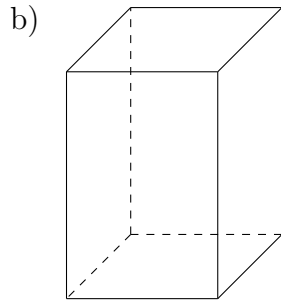
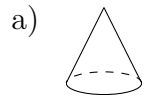




4)

Complete the shape by drawing the missing invisible lines. Use a dotted or dashed line.

Quick:
1443



Good Luck!