

# Worksheet

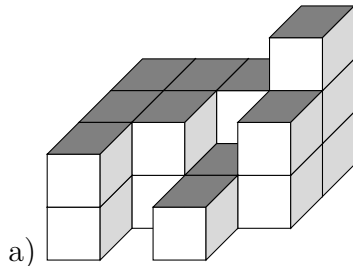
07/31/2018

Free on dw-math.com

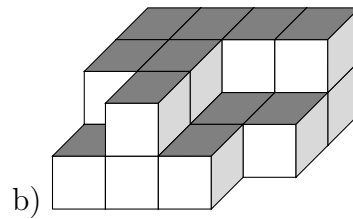
Problem quickname: 7569

1)

Create the plan for the cube building as shown in a).

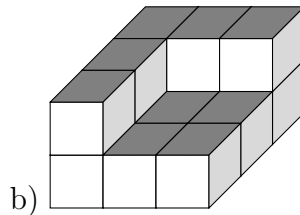
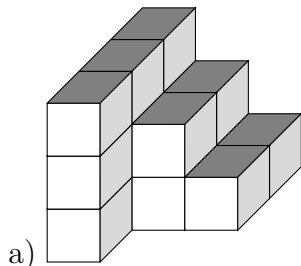


2	2	2	3
2	2	1	2
2	0	1	0



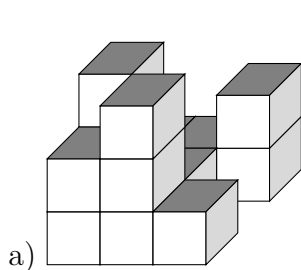
2)

Create the plan for the cube building.

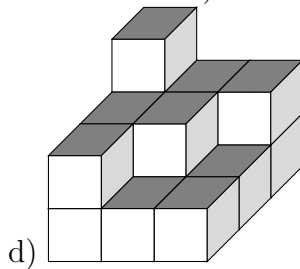
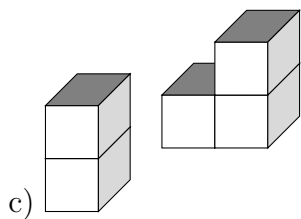
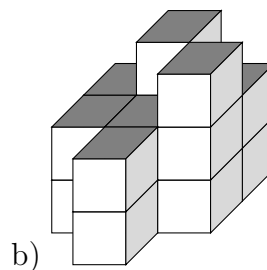


3)

Create the plan for the cube building as shown in a).

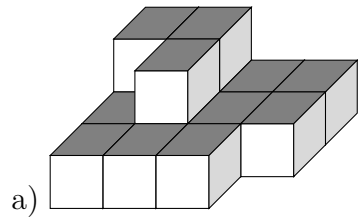


1	1	2
3	1	0
2	3	1

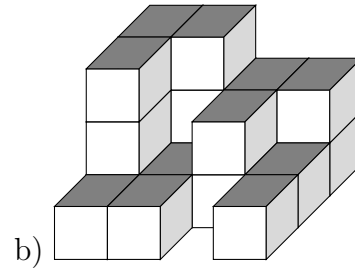


4)

Create the plan for the cube building as shown in a).



2	2	1	1
1	2	1	1
1	1	1	0



Good Luck!