

# Worksheet

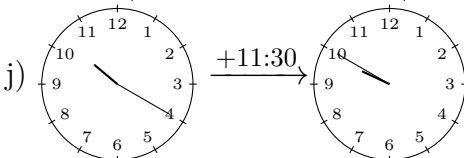
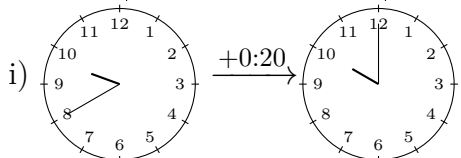
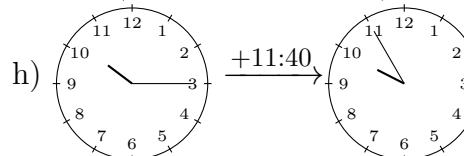
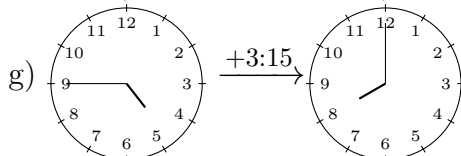
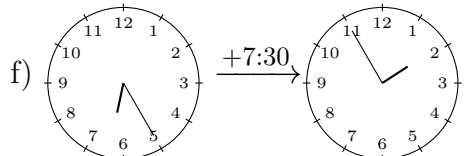
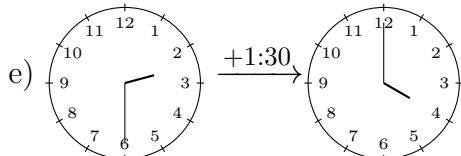
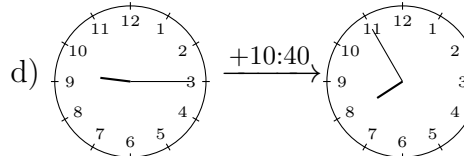
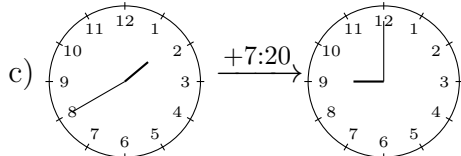
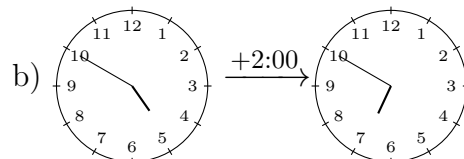
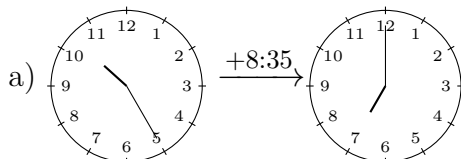
01/23/2019

Free on dw-math.com

Problem quickname: 7624

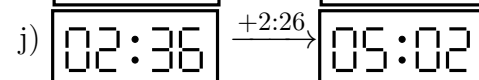
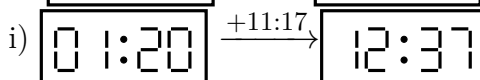
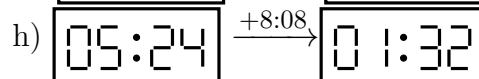
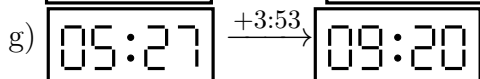
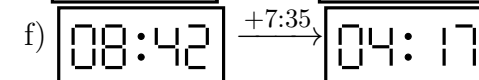
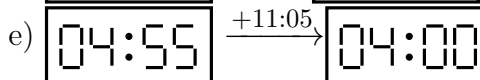
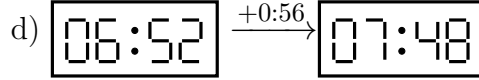
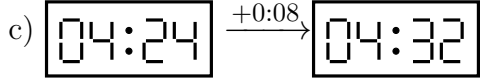
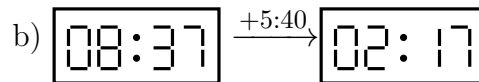
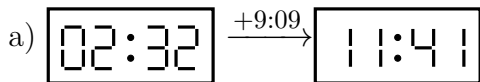
1)

Draw the clock's hands to show the correct time after the period of time indicated has passed.

Quick:  
7624

2)

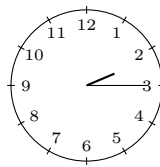
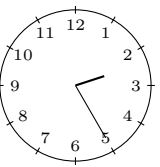
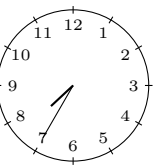
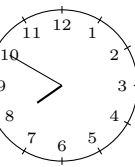
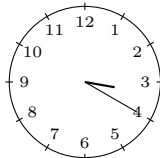
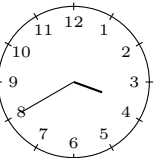
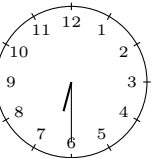
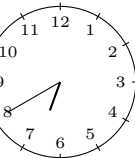
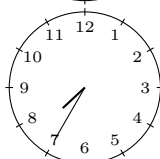
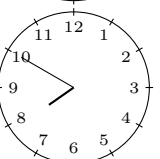
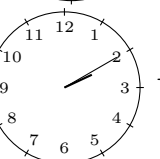
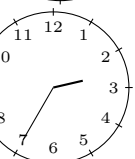
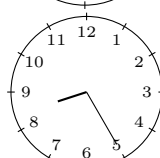
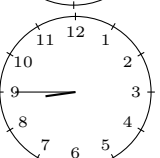
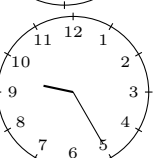
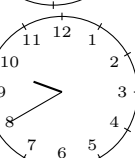
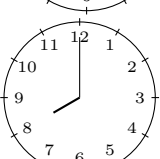
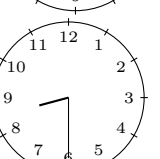
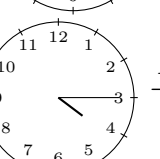
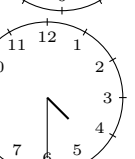
What time is shown on the display after the period of time indicated has passed?

Quick:  
7624

3)

Quick:  
7624

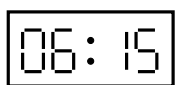
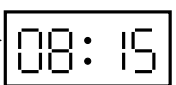
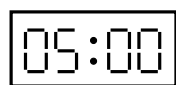
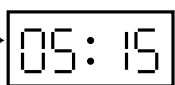


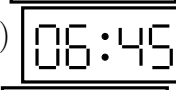
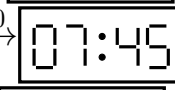






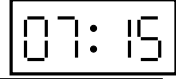

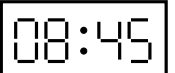
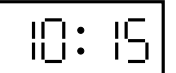
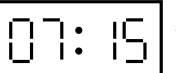
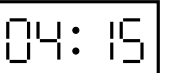
Draw the clock's hands to show the correct time after the period of time indicated has passed.

a)		$\xrightarrow{+0:10}$		b)		$\xrightarrow{+0:15}$	
c)		$\xrightarrow{+0:20}$		d)		$\xrightarrow{+0:10}$	
e)		$\xrightarrow{+0:15}$		f)		$\xrightarrow{+0:25}$	
g)		$\xrightarrow{+0:20}$		h)		$\xrightarrow{+0:15}$	
i)		$\xrightarrow{+0:30}$		j)		$\xrightarrow{+0:15}$	

4)

Quick:  
7624

What time is shown on the display after the period of time indicated has passed?

a)		$\xrightarrow{+2:00}$		b)		$\xrightarrow{+0:15}$	
c)		$\xrightarrow{+11:45}$		d)		$\xrightarrow{+1:00}$	
e)		$\xrightarrow{+0:45}$		f)		$\xrightarrow{+0:45}$	
g)		$\xrightarrow{+9:45}$		h)		$\xrightarrow{+2:45}$	
i)		$\xrightarrow{+1:30}$		j)		$\xrightarrow{+9:00}$	

Good Luck!