

Worksheet

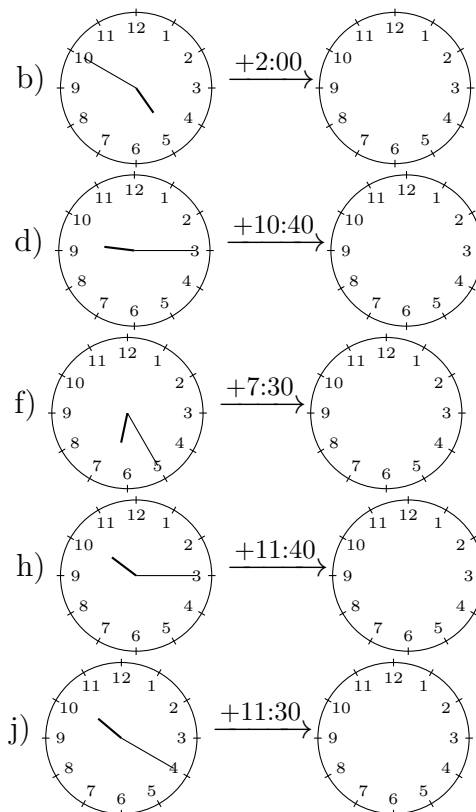
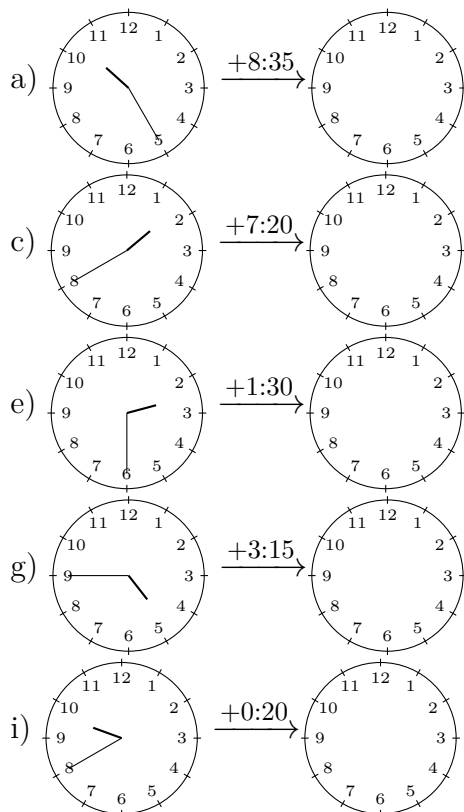
01/23/2019

Free on dw-math.com

Problem quickname: 7624

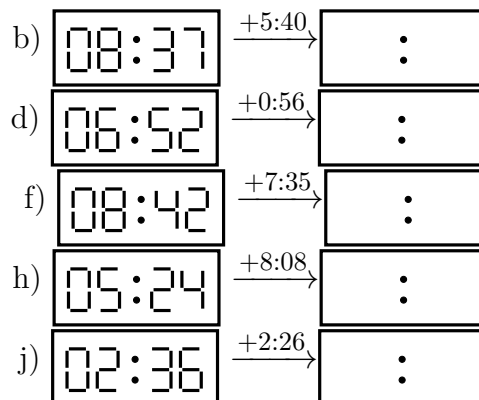
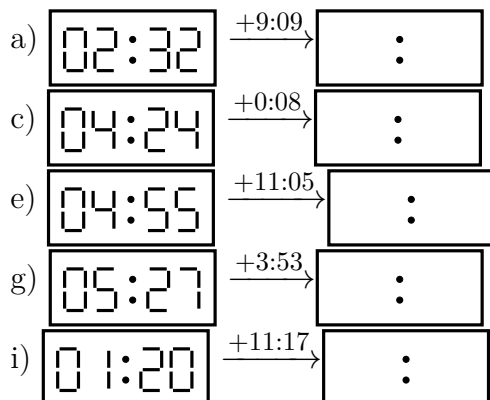
1)

Draw the clock's hands to show the correct time after the period of time indicated has passed.



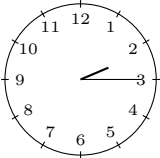
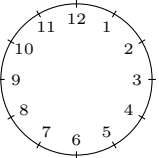
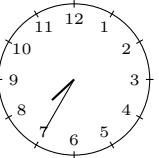
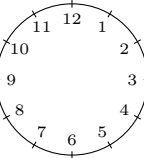
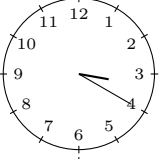
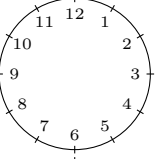
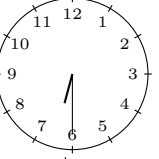
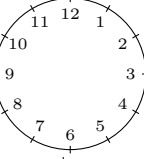
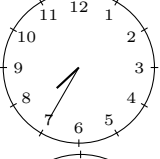
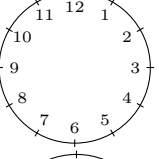
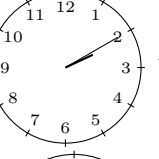
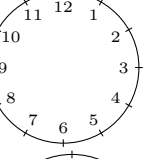
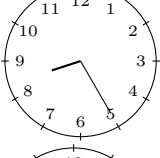
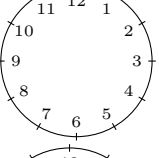
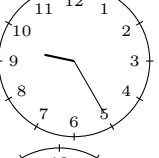
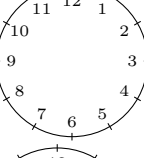
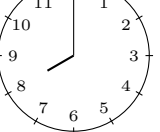

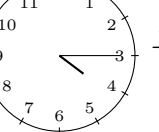
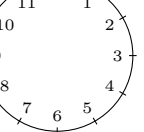
2)

What time is shown on the display after the period of time indicated has passed?



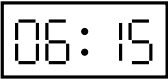

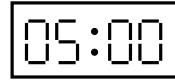
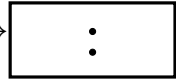

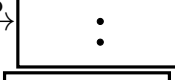
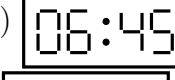
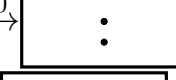
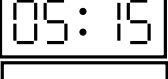
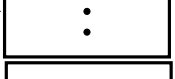

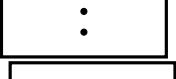

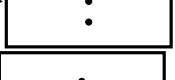
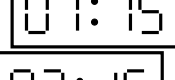
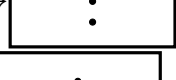
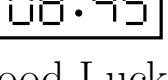
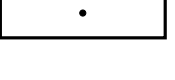
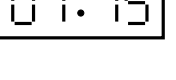
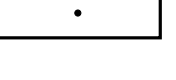
3)

Draw the clock's hands to show the correct time after the period of time indicated has passed.

a)		$\xrightarrow{+0:10}$		b)		$\xrightarrow{+0:15}$	
c)		$\xrightarrow{+0:20}$		d)		$\xrightarrow{+0:10}$	
e)		$\xrightarrow{+0:15}$		f)		$\xrightarrow{+0:25}$	
g)		$\xrightarrow{+0:20}$		h)		$\xrightarrow{+0:15}$	
i)		$\xrightarrow{+0:30}$		j)		$\xrightarrow{+0:15}$	

4)

What time is shown on the display after the period of time indicated has passed?

a)		$\xrightarrow{+2:00}$		b)		$\xrightarrow{+0:15}$	
c)		$\xrightarrow{+11:45}$		d)		$\xrightarrow{+1:00}$	
e)		$\xrightarrow{+0:45}$		f)		$\xrightarrow{+0:45}$	
g)		$\xrightarrow{+9:45}$		h)		$\xrightarrow{+2:45}$	
i)		$\xrightarrow{+1:30}$		j)		$\xrightarrow{+9:00}$	

Good Luck!