

Worksheet

01/23/2019


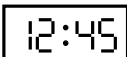




Free on dw-math.com

Problem quickname: 8346

1)

Match the clock display with the corresponding time specification.

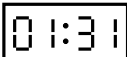


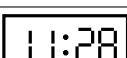


Quick:
8346

Clock face			Time specification
	A	→	4 five o'clock
	B	→	5 a quarter to one
	C	→	2 half past four
	D	→	6 half past six
	E	→	1 a quarter past one
	F	→	3 a quarter to six

2)

Match the clock display with the corresponding time specification.

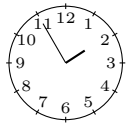
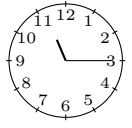
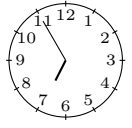


Quick:
8346

Clock face			Time specification
	A	→	3 twenty-nine to two
	B	→	4 twenty-two to nine
	C	→	6 one past one
	D	→	1 twenty-eight past eleven
	E	→	2 twenty-one to six
	F	→	5 sixteen past one

3)

Quick:
8346

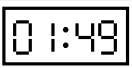
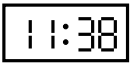
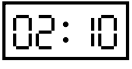

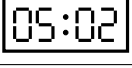
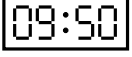
Match the clock faces with the corresponding time specification.

Clock face			Time specification
	A	→	4 five to two
	B	→	1 a quarter past eleven
	C	→	5 five to seven
	D	→	3 half past eight
	E	→	2 half past ten

4)

Quick:
8346

Match the clock display with the corresponding time specification.

Clock face			Time specification
	A	→	3 eleven to two
	B	→	5 twenty-two to twelve
	C	→	4 ten past two
	D	→	6 a quarter to two
	E	→	1 two past five
	F	→	2 ten to ten

Good Luck!