

# Worksheet


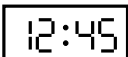
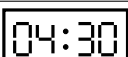



01/23/2019

Free on dw-math.com

Problem quickname: 8346

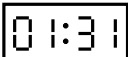





1)

Match the clock display with the corresponding time specification.

Clock face			Time specification
	A	1	a quarter past one
	B	2	half past four
	C	3	a quarter to six
	D	4	five o'clock
	E	5	a quarter to one
	F	6	half past six

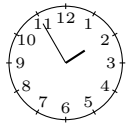
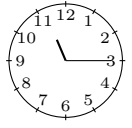
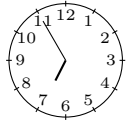


2)

Match the clock display with the corresponding time specification.

Clock face			Time specification
	A	1	twenty-eight past eleven
	B	2	twenty-one to six
	C	3	twenty-nine to two
	D	4	twenty-two to nine
	E	5	sixteen past one
	F	6	one past one

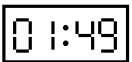
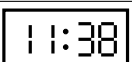
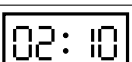
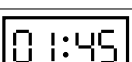
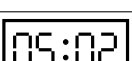
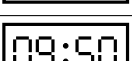
3)

Match the clock faces with the corresponding time specification.

Clock face			Time specification
	A	1	a quarter past eleven
	B	2	half past ten
	C	3	half past eight
	D	4	five to two
	E	5	five to seven

4)

Match the clock display with the corresponding time specification.

Clock face			Time specification
	A	1	two past five
	B	2	ten to ten
	C	3	eleven to two
	D	4	ten past two
	E	5	twenty-two to twelve
	F	6	a quarter to two

Good Luck!