

# Worksheet

12/06/2020


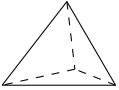
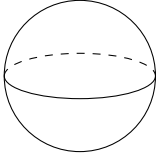

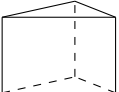

Free on dw-math.com

Problem quickname: 6031

1)

For every shape on the left-hand side, find the correct formula for the mentioned property on the right-hand side.

Quick:  
6031

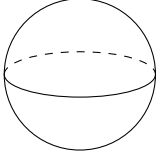



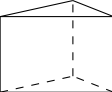

	Shape		Surface area
A		→ 4	$A = 2 \cdot (a \cdot b + a \cdot c + b \cdot c)$
B		→ 3	$A = a^2 \cdot \sqrt{3}$
C		→ 5	$A = 4 \cdot \pi \cdot r^2$
D		→ 2	$A = 2 \cdot \pi r^2 + 2 \cdot \pi \cdot r \cdot h$
E		→ 6	$A = 2 \cdot A(\text{Grundfläche}) + h \cdot (a + b + c)$
F		→ 1	$A = a^2 + a \cdot \sqrt{4 \cdot h^2 + a^2}$

2)

For every shape on the left-hand side, find the correct formula for the mentioned

Quick:  
6031

property on the right-hand side.


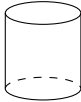
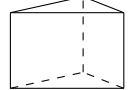
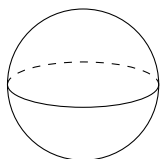
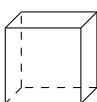

	Shape		Volume
A		→ 5	$V = \frac{4}{3} \cdot \pi \cdot r^3$
B		→ 4	$V = \frac{1}{3} \cdot a^2 \cdot h$
C		→ 2	$V = \frac{a^3}{12} \cdot \sqrt{2}$
D		→ 1	$V = a^3$
E		→ 6	$V = A(\text{Grundfläche}) \cdot h$
F		→ 3	$V = a \cdot b \cdot c$

3)

For every shape on the left-hand side, find the correct formula for the mentioned

Quick:  
6031

property on the right-hand side.

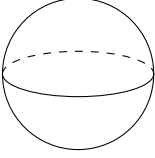
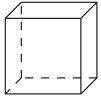
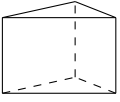
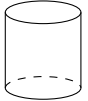
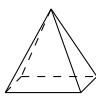

Shape		Volume	
A	A pyramid 	→ 4	$V = a \cdot b \cdot c$
B	A cylinder 	→ 5	$V = \pi \cdot r^2 \cdot h$
C	A prism 	→ 1	$V = A(\text{Grundfläche}) \cdot h$
D	A sphere 	→ 6	$V = \frac{4}{3} \cdot \pi \cdot r^3$
E	A cube 	→ 3	$V = a^3$
F	A square pyramid 	→ 2	$V = \frac{1}{3} \cdot a^2 \cdot h$

4)

For every shape on the left-hand side, find the correct formula for the mentioned

Quick:  
6031

property on the right-hand side.

Shape		Surface area	
A	A sphere 	→ 2	$A = 4 \cdot \pi \cdot r^2$
B	A cube 	→ 4	$A = 6 \cdot a^2$
C	A prism 	→ 6	$A = 2 \cdot A(\text{Grundfläche}) + h \cdot (a + b + c)$
D	A cylinder 	→ 5	$A = 2 \cdot \pi r^2 + 2 \cdot \pi \cdot r \cdot h$
E	A square pyramid 	→ 3	$A = a^2 + a \cdot \sqrt{4 \cdot h^2 + a^2}$
F	A circular cone 	→ 1	$A = r \cdot \pi \cdot (r + s)$

Good Luck!