

Worksheet

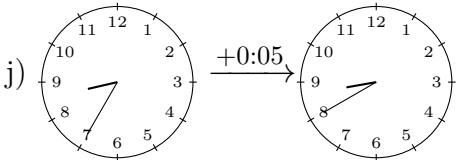
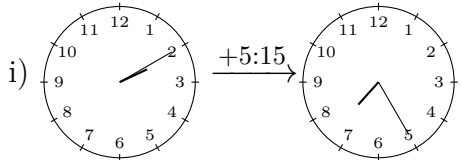
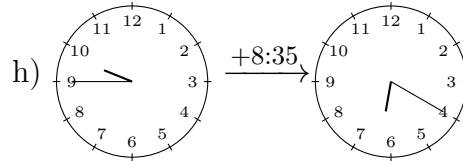
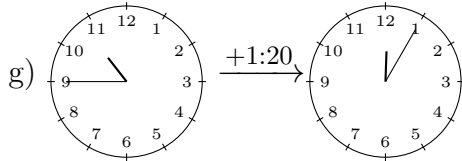
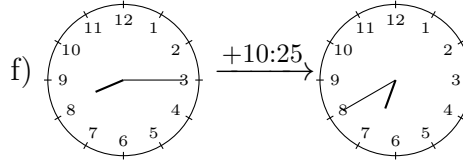
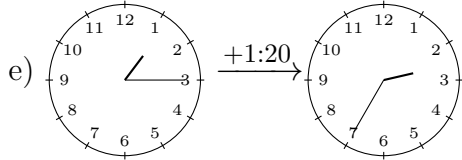
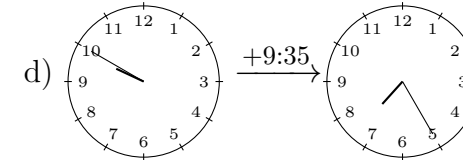
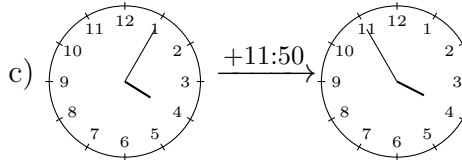
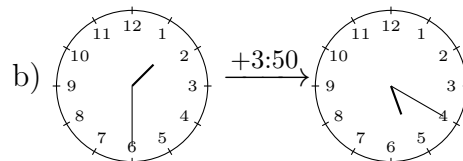
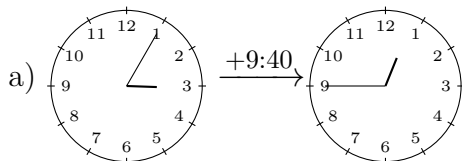
01/23/2019

Free on dw-math.com

Problem quickname: 7624

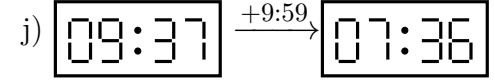
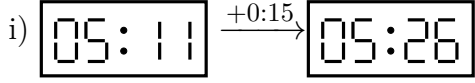
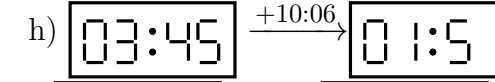
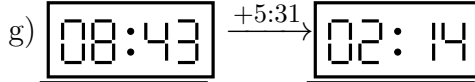
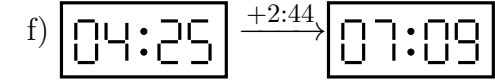
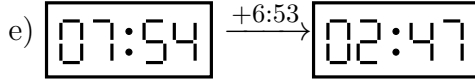
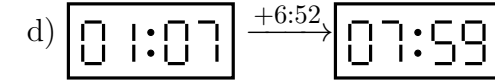
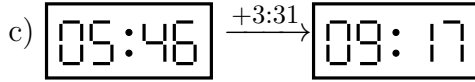
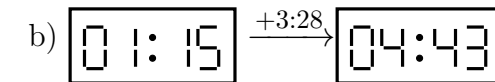
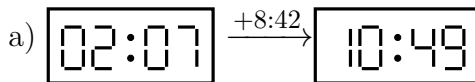
1)

Draw the clock's hands to show the correct time after the period of time indicated has passed.

Quick:
7624

2)

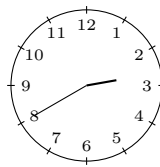
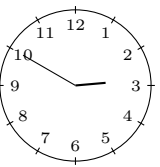
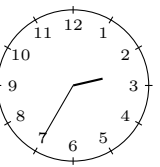
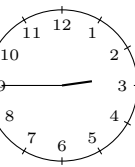
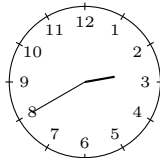
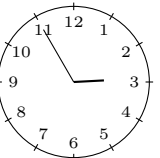
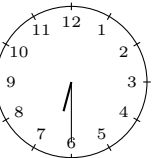
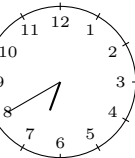
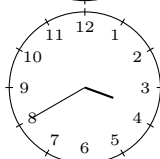
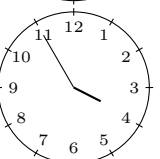
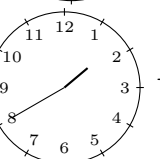
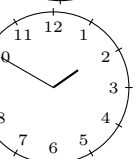
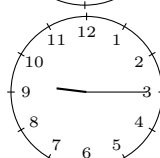
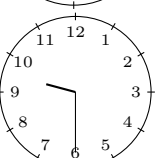
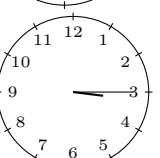
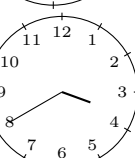
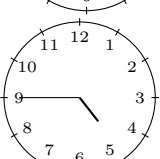
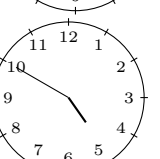
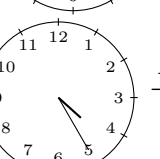
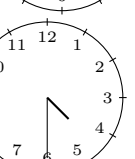
What time is shown on the display after the period of time indicated has passed?

Quick:
7624

3)

Quick:
7624

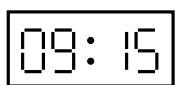


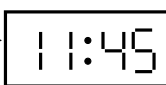
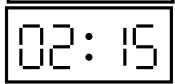
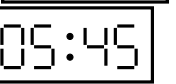
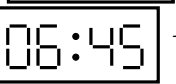


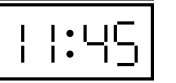
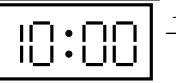
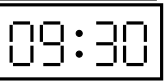



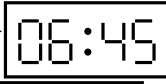

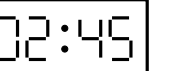

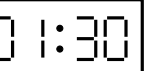
Draw the clock's hands to show the correct time after the period of time indicated has passed.

a)		$\xrightarrow{+0:10}$		b)		$\xrightarrow{+0:10}$	
c)		$\xrightarrow{+0:15}$		d)		$\xrightarrow{+0:10}$	
e)		$\xrightarrow{+0:15}$		f)		$\xrightarrow{+0:10}$	
g)		$\xrightarrow{+0:15}$		h)		$\xrightarrow{+0:25}$	
i)		$\xrightarrow{+0:05}$		j)		$\xrightarrow{+0:05}$	

4)

Quick:
7624

What time is shown on the display after the period of time indicated has passed?

a)		$\xrightarrow{+11:15}$		b)		$\xrightarrow{+8:15}$	
c)		$\xrightarrow{+3:30}$		d)		$\xrightarrow{+2:45}$	
e)		$\xrightarrow{+1:45}$		f)		$\xrightarrow{+11:30}$	
g)		$\xrightarrow{+11:30}$		h)		$\xrightarrow{+4:15}$	
i)		$\xrightarrow{+1:30}$		j)		$\xrightarrow{+9:30}$	

Good Luck!