

Worksheet

05/12/2020

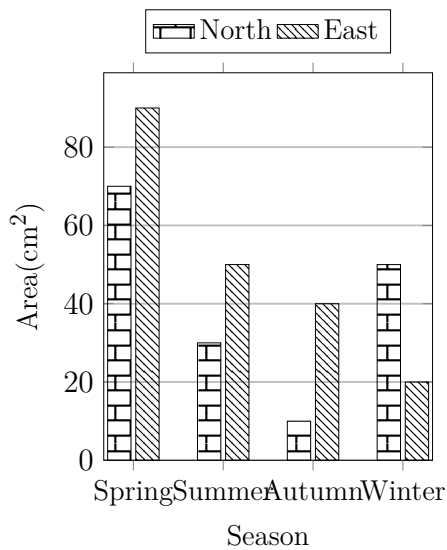
Free on dw-math.com

Problem quickname: 8301

1)

Read the numbers from the diagram to complete the table.

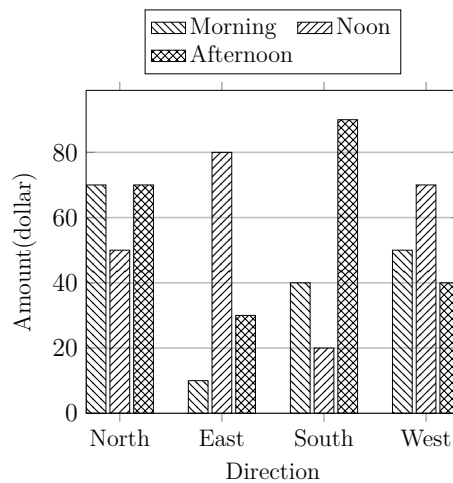
Season	Area(cm ²)	
	North	East
Spring		
Summer		
Autumn		
Winter		



2)

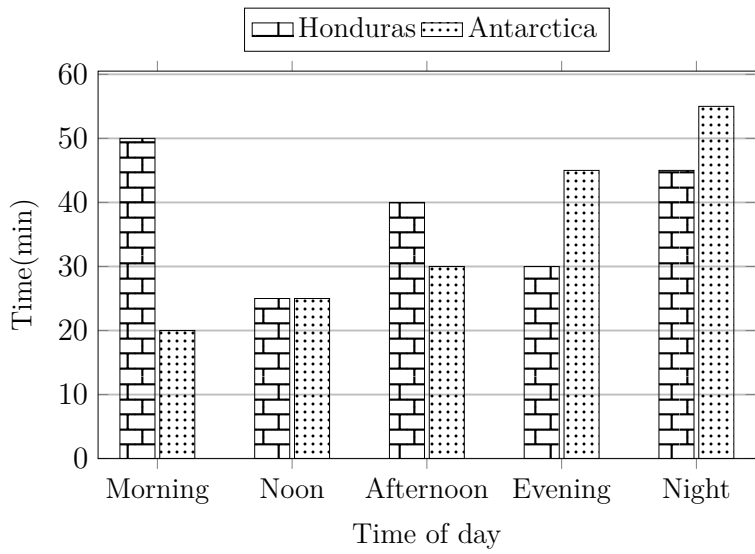
Read the numbers from the diagram to complete the table.

Direction	Amount(dollar)		
	Morning	Noon	Afternoon
North			
East			
South		20	
West			



3)

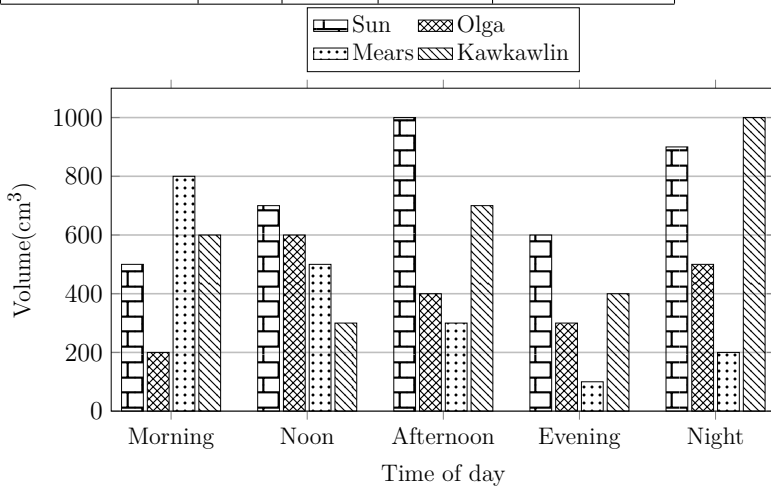
Create a table with headings, then put the values from the bar chart into the table.



4)

Read the numbers from the diagram to complete the table.

Time of day	Volume(cm^3)			
	Sun	Olga	Mears	Kawkawlin
Morning				
Noon				
Afternoon				
Evening				
Night				



Good Luck!