

Worksheet

01/23/2019





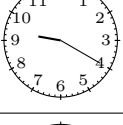

Free on dw-math.com

Problem quickname: 8346

1)

Match the clock faces with the corresponding time specification.

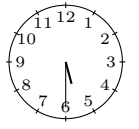
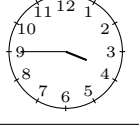
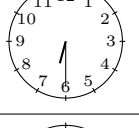
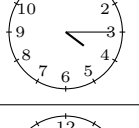
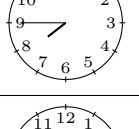
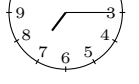
Quick:
8346

Clock face			Time specification
	A	→	3 twenty-eight past seven
	B	→	6 twenty-seven past three
	C	→	4 ten to eleven
	D	→	2 half past twelve
	E	→	1 twenty past nine
	F	→	5 twenty-one past ten

2)

Quick:
8346



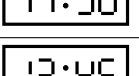

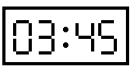

Match the clock faces with the corresponding time specification.

Clock face		→		Time specification
	A	→	6	half past five
	B	→	5	a quarter to four
	C	→	1	half past six
	D	→	2	a quarter past four
	E	→	3	a quarter to eight
	F	→	4	a quarter past seven

3)

Quick:
8346

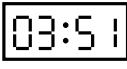
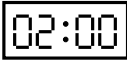

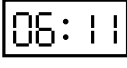

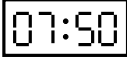
Match the clock display with the corresponding time specification.

Clock face		→		Time specification
	A	→	2	a quarter to two
	B	→	6	twelve o'clock
	C	→	5	half past eleven
	D	→	3	a quarter to one
	E	→	1	seven o'clock
	F	→	4	a quarter to four

4)

Quick:
8346

Match the clock display with the corresponding time specification.

Clock face			Time specification
	A	→	2
	B	→	6
	C	→	1
	D	→	3
	E	→	4
	F	→	5
			nine to four
			two o'clock
			three past five
			eleven past six
			seven past ten
			ten to eight

Good Luck!