

# Worksheet




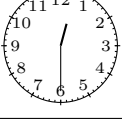


01/23/2019

Free on dw-math.com

Problem quickname: 8346


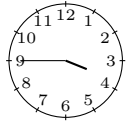

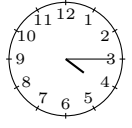


1)

Match the clock faces with the corresponding time specification.

Clock face			Time specification
	A	1	twenty past nine
	B	2	half past twelve
	C	3	twenty-eight past seven
	D	4	ten to eleven
	E	5	twenty-one past ten
	F	6	twenty-seven past three

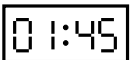

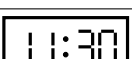



2)

Match the clock faces with the corresponding time specification.

Clock face			Time specification
	A	1	half past six
	B	2	a quarter past four
	C	3	a quarter to eight
	D	4	a quarter past seven
	E	5	a quarter to four
	F	6	half past five

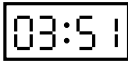
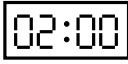
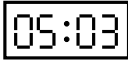
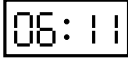

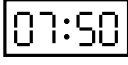
3)

Match the clock display with the corresponding time specification.

Clock face			Time specification
	A	1	seven o'clock
	B	2	a quarter to two
	C	3	a quarter to one
	D	4	a quarter to four
	E	5	half past eleven
	F	6	twelve o'clock

4)

Match the clock display with the corresponding time specification.

Clock face			Time specification
	A	1	three past five
	B	2	nine to four
	C	3	eleven past six
	D	4	seven past ten
	E	5	ten to eight
	F	6	two o'clock

Good Luck!