

Worksheet

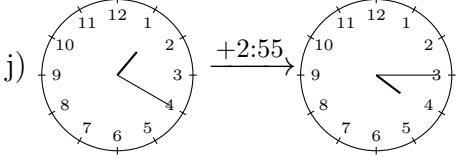
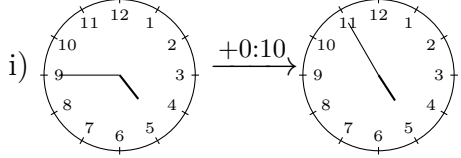
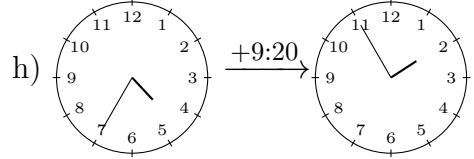
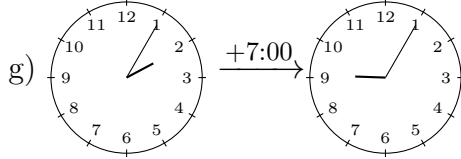
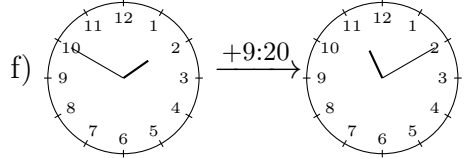
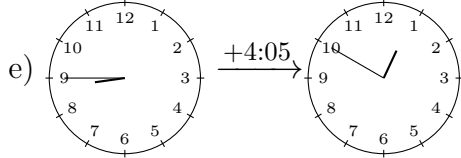
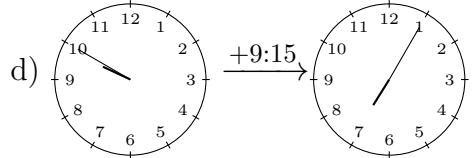
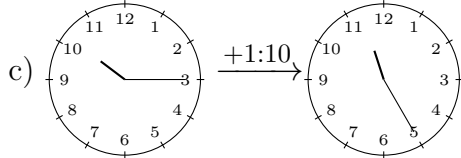
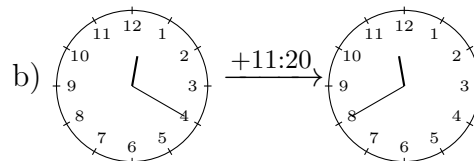
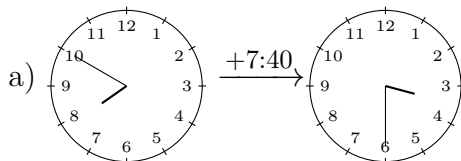
01/23/2019

Free on dw-math.com

Problem quickname: 7624

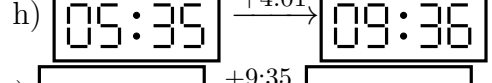
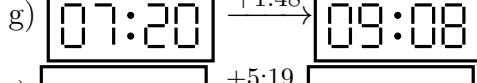
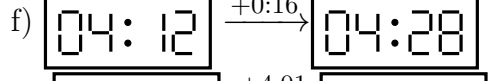
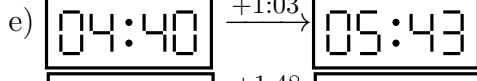
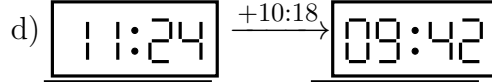
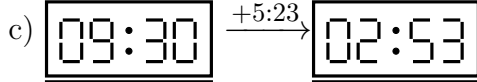
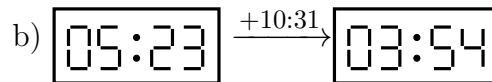
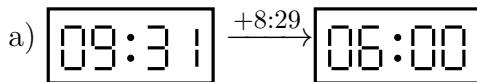
1)

Draw the clock's hands to show the correct time after the period of time indicated has passed.

Quick:
7624

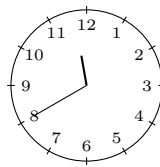
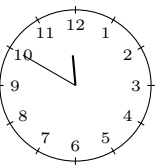
2)

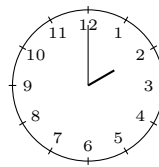
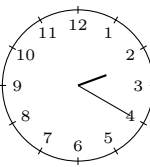
What time is shown on the display after the period of time indicated has passed?

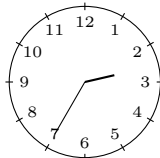
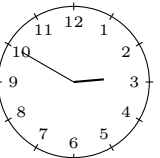
Quick:
7624

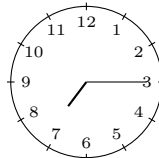
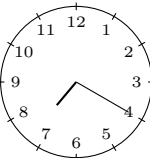
3)

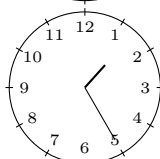
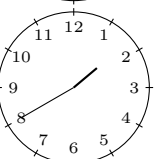
Draw the clock's hands to show the correct time after the period of time indicated has passed.

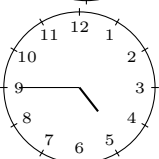
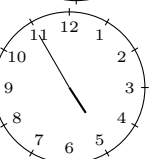
a)  $\xrightarrow{+0:10}$ 

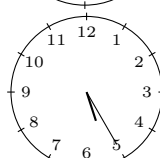
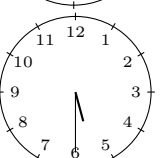
b)  $\xrightarrow{+0:20}$ 

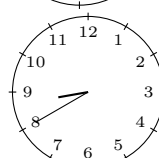
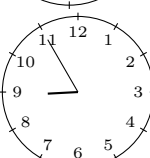
c)  $\xrightarrow{+0:15}$ 

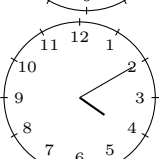
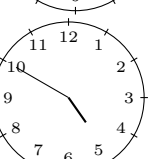
d)  $\xrightarrow{+0:05}$ 

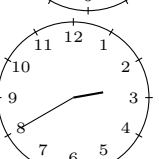
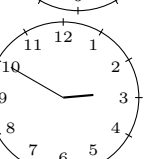
e)  $\xrightarrow{+0:15}$ 

f)  $\xrightarrow{+0:10}$ 

g)  $\xrightarrow{+0:05}$ 


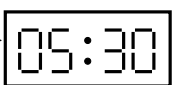
h)  $\xrightarrow{+0:15}$ 


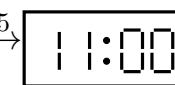
i)  $\xrightarrow{+0:40}$ 



j)  $\xrightarrow{+0:10}$ 

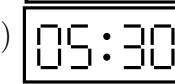
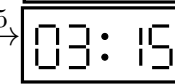
4)

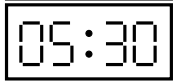
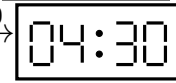
What time is shown on the display after the period of time indicated has passed?

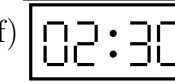
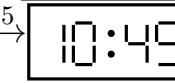
a)  $\xrightarrow{+3:00}$ 

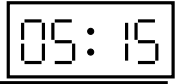

b)  $\xrightarrow{+5:45}$ 



c)  $\xrightarrow{+7:45}$ 

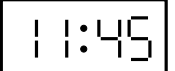
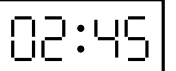
d)  $\xrightarrow{+9:45}$ 

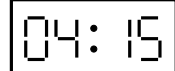
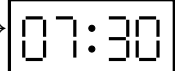
e)  $\xrightarrow{+11:00}$ 

f)  $\xrightarrow{+8:15}$ 

g)  $\xrightarrow{+5:45}$ 

h)  $\xrightarrow{+6:30}$ 

i)  $\xrightarrow{+3:00}$ 

j)  $\xrightarrow{+3:15}$ 

Good Luck!