

Worksheet

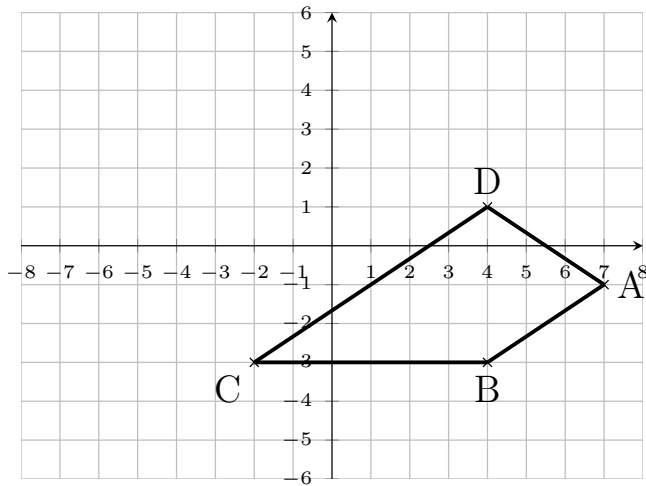
05/12/2019

Free on dw-math.com

Problem quickname: 7975

1)

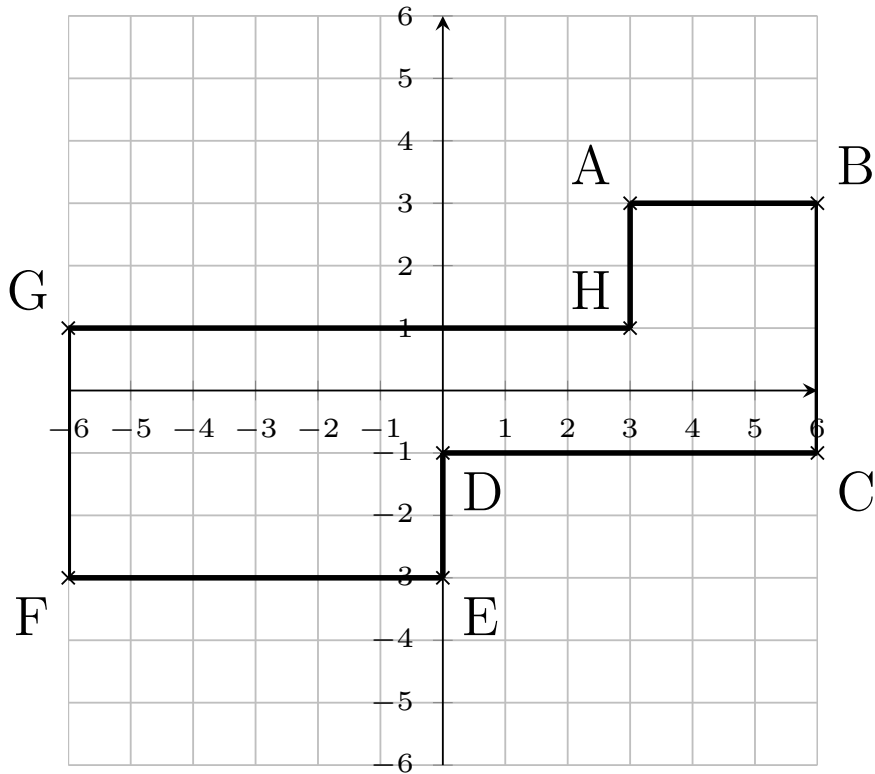
Draw a suitable coordinate plane and mark the points given. Connect the points with straight lines so that they form a closed shape.

Quick:
7975 $A(7|-1)$, $B(4|-3)$, $C(-2|-3)$, $D(4|1)$ 2)

Mark the points on the coordinate plane. Connect the points with straight lines so that

Quick:
7975

they form a closed shape.

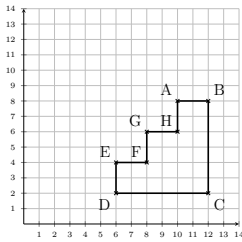


$A(3|3)$, $B(6|3)$, $C(6|-1)$, $D(0|-1)$, $E(0|-3)$, $F(-6|-3)$, $G(-6|1)$, $H(3|1)$

3)

Mark the points on the coordinate plane. Connect the points with straight lines so that they form a closed shape.

Quick:
7975



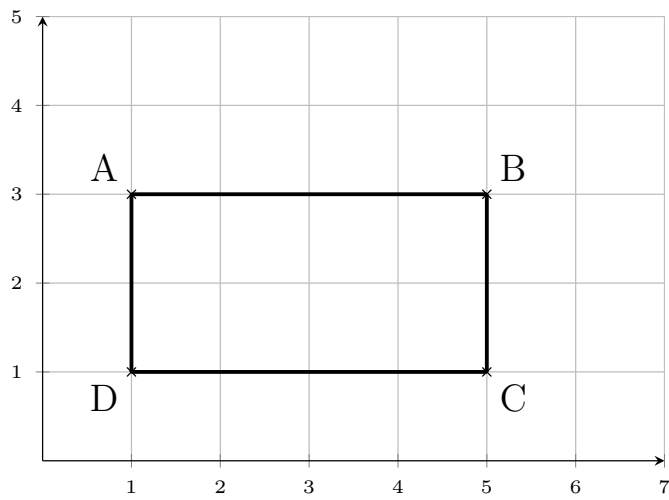
$A(10|8)$, $B(12|8)$, $C(12|2)$, $D(6|2)$, $E(6|4)$, $F(8|4)$, $G(8|6)$, $H(10|6)$

4)

Draw a suitable coordinate plane and mark the points given. Connect the points with

Quick:
7975

straight lines so that they form a closed shape.



$A(1|3)$, $B(5|3)$, $C(5|1)$, $D(1|1)$

Good Luck!