

Worksheet

07/14/2019

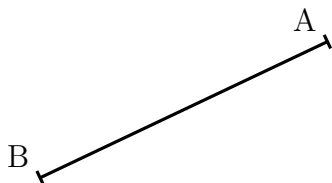
Free on dw-math.com

Problem quickname: 9230


1)

Measure the length of the line segment exactly to the millimetre.

a)



b)




c)




2)

Measure the length of the line segment exactly to the millimetre.


a)




b)








c)





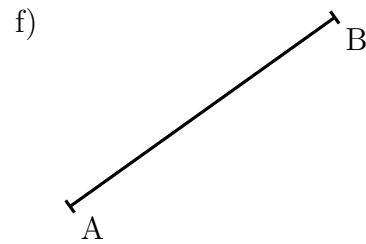
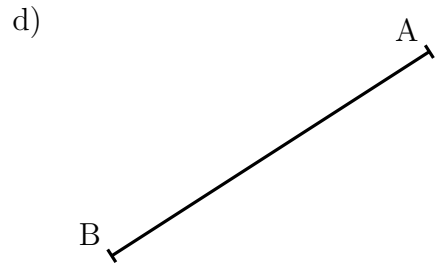
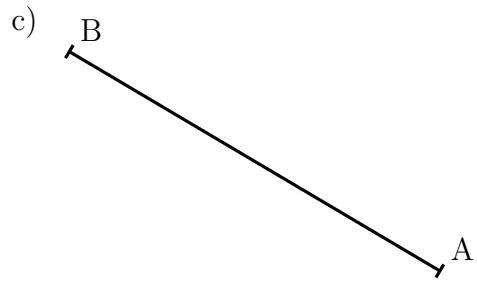
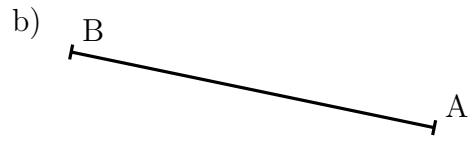
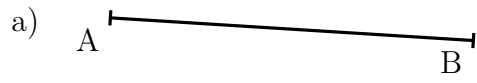
3)

Measure the length of the line segment exactly to the millimetre.



4)

Measure the length of the line segment exactly to the millimetre.



Good Luck!