

Worksheet

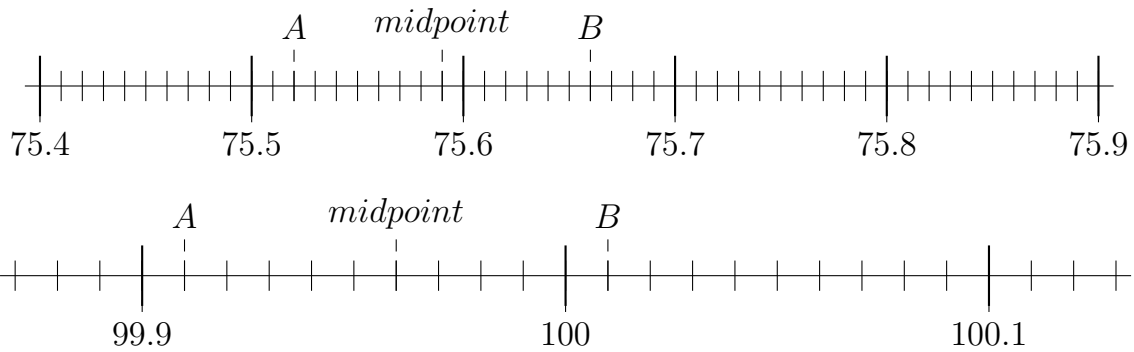
05/25/2018

Free on dw-math.com

Problem quickname: 1901

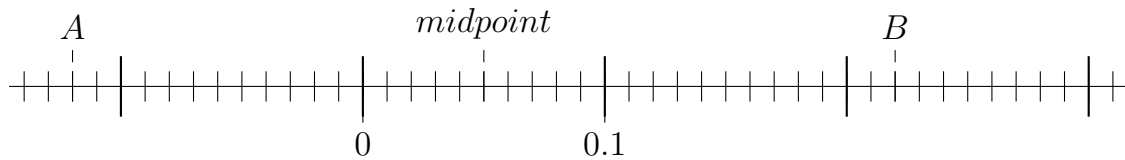
1)

Mark the midpoint of A und B!

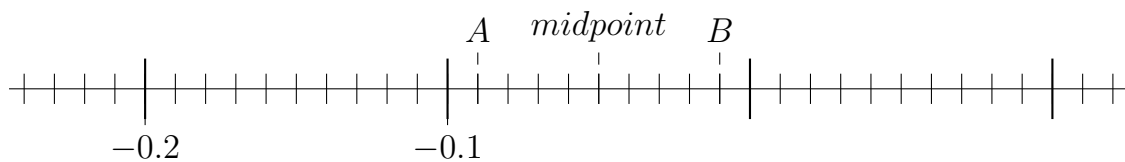
Quick:
1901

2)

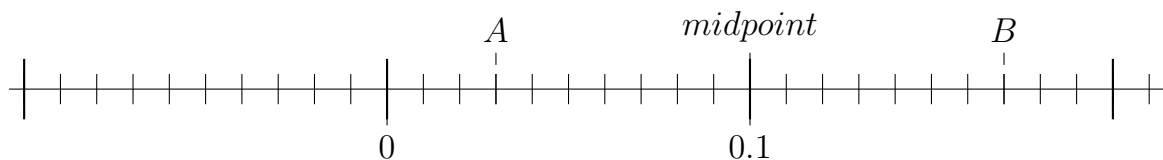
Mark the midpoint of A und B! Identify the number at positions A, B and the midpoint.

Quick:
1901

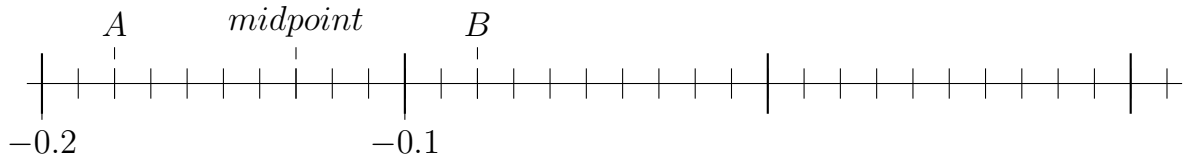
A = -0.12; B = 0.22; midpoint = 0.05



A = -0.09; B = -0.01; midpoint = -0.05



A = 0.03; B = 0.17; midpoint = 0.1

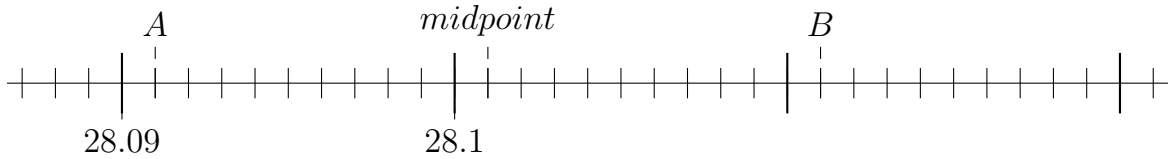


$A = -0.18$; $B = -0.08$; midpoint = -0.13

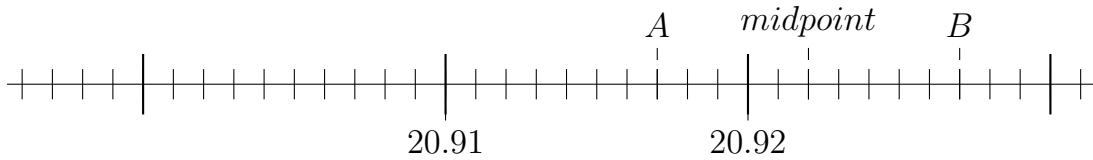
3)

Mark the midpoint of A und B! Identify the number at positions A, B and the midpoint.

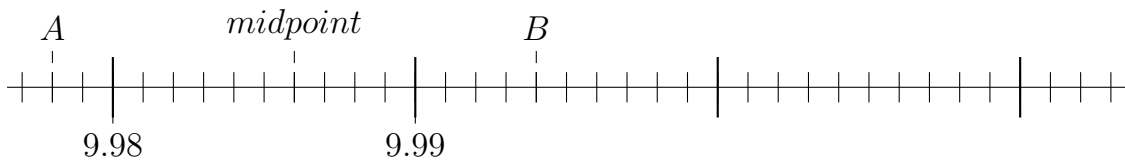
Quick:
1901



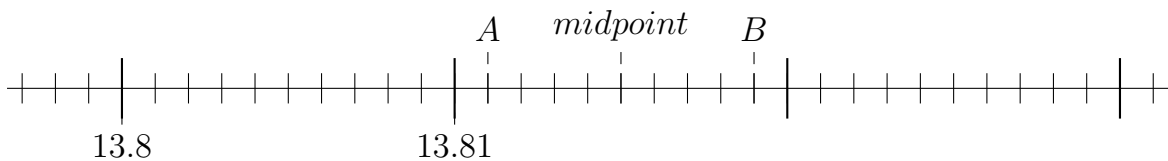
$A = 28.091$; $B = 28.111$; midpoint = 28.101



$A = 20.917$; $B = 20.927$; midpoint = 20.922



$A = 9.978$; $B = 9.994$; midpoint = 9.986

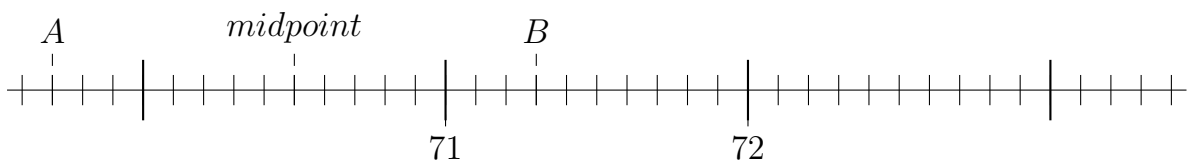


$A = 13.811$; $B = 13.819$; midpoint = 13.815

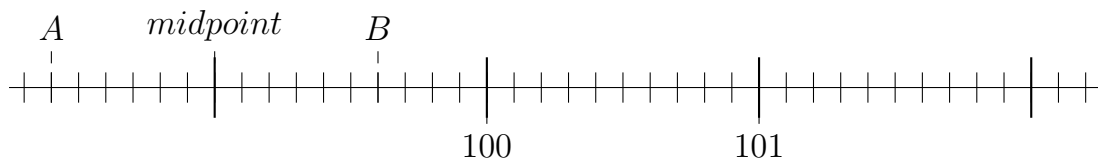
4)

Mark the midpoint of A und B! Identify the number at positions A, B and the midpoint.

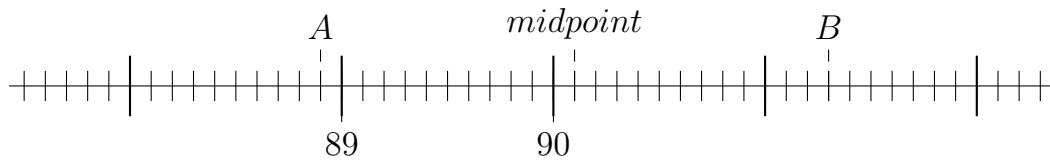
Quick:
1901



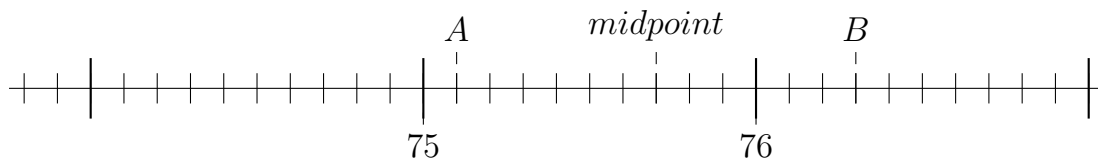
$A = 69.7$; $B = 71.3$; midpoint = 70.5



$A = 98.4$; $B = 99.6$; midpoint = 99



$A = 88.9$; $B = 91.3$; midpoint = 90.1



$A = 75.1$; $B = 76.3$; midpoint = 75.7

Good Luck!