

Worksheet

06/15/2020

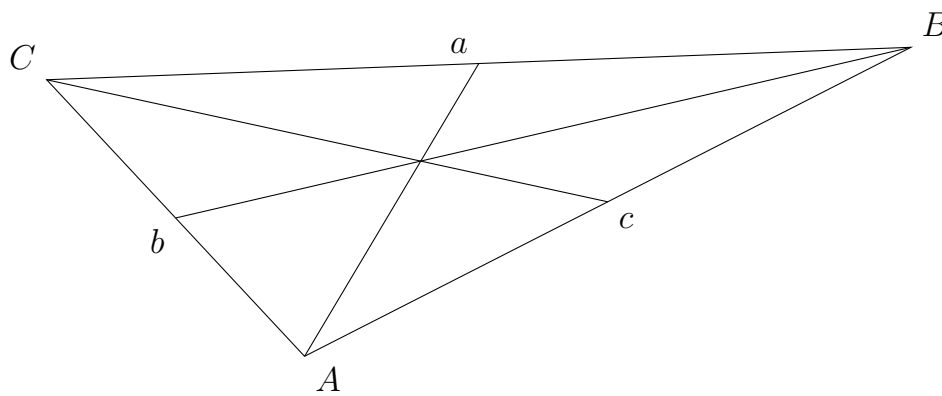
Free on dw-math.com

Problem quickname: 2502

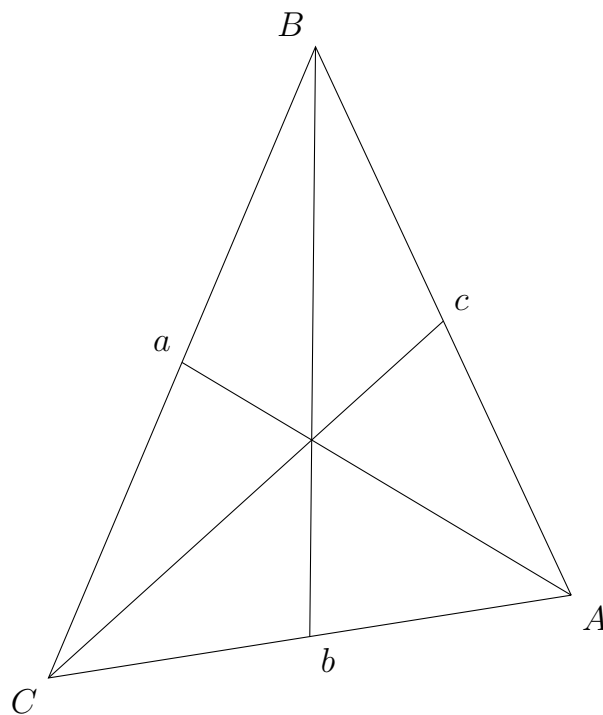
1)

Mark the centroid S of this triangle.

a)



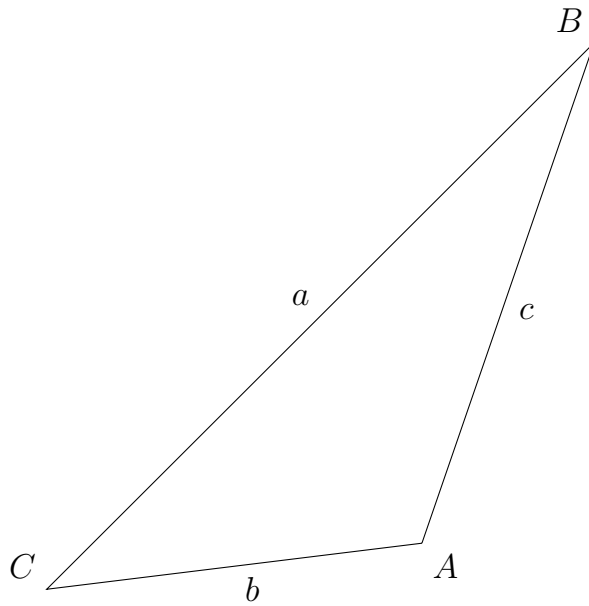
b)



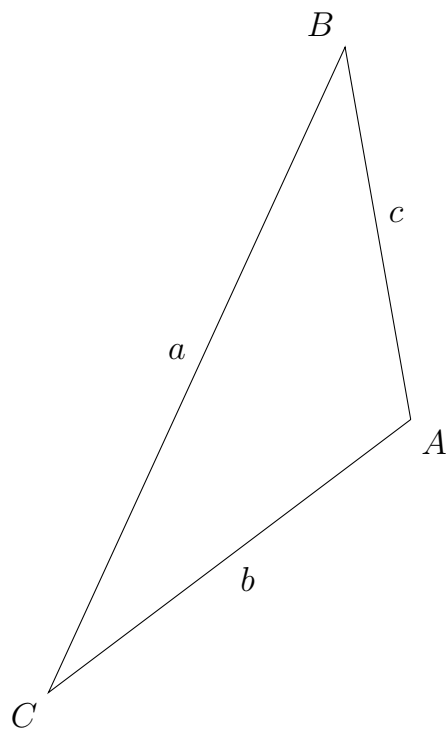
2)

Construct the medians and mark the centroid S of this triangle.

a)



b)



3)

Draw the triangle, construct the medians and mark the centroid S .

a) $a = 7.3$ cm, $b = 6$ cm, $c = 4$ cm

b) $\beta = 41$ degrees, $a = 7.3$ cm, $\gamma = 66$ degrees

4)

Draw the triangle, construct the medians and mark the centroid S.

a) $a = 5.2$ cm, $b = 6$ cm, $c = 8$ cm

b) $\beta = 31$ degrees, $a = 14.3$ cm, $\gamma = 35$ degrees

Good Luck!