

# Worksheet

12/02/2019

Free on dw-math.com

Problem quickname: 3344

1)

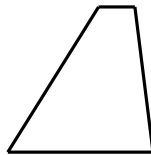
What geometric shape is shown? There may be more than one answer.

a)



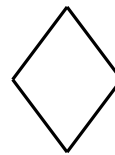
- Rectangle
- Parallelogram
- Circle
- Rhombus

b)




- Square
- Ellipse
- Rectangle
- Trapezoid

c)



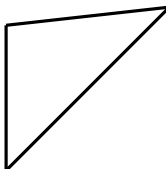
- Rectangle
- Trapezoid
- Circle
- Rhombus

d)




- Parallelogram
- Square
- Trapezoid
- Rhombus

e)



- Triangle
- Ellipse
- Rectangle
- Circle

f)




- Circle
- Trapezoid
- Rectangle
- Parallelogram

2)

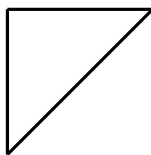
What geometric shape is shown?

a)



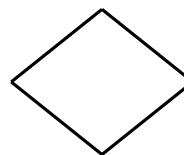
- Ellipse
- Circle
- Triangle
- Square

b)




- Rectangle
- Trapezoid
- Triangle
- Ellipse

c)



- Triangle
- Circle
- Rhombus
- Ellipse

d)




- Circle
- Ellipse
- Triangle
- Parallelogram

3)


What geometric shape is shown?

a)




- Rectangle
- Circle
- Triangle
- Square

b)




- Square
- Circle
- Ellipse
- Triangle

c)



- Rectangle
- Ellipse
- Triangle
- Circle

d)




- Circle
- Triangle
- Ellipse
- Square

4)

What geometric shape is shown?

a)



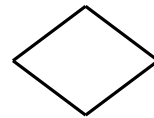
- Parallelogram
- Ellipse
- Triangle
- Circle

b)



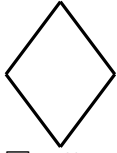
- Parallelogram
- Rhombus
- Circle
- Trapezoid

c)



- Rhombus
- Triangle
- Ellipse
- Circle

d)



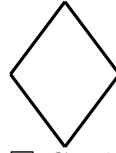
- Ellipse
- Rectangle
- Triangle
- Rhombus

e)



- Circle
- Rhombus
- Ellipse
- Rectangle

f)



- Circle
- Triangle
- Rhombus
- Rectangle

Good Luck!