

Worksheet

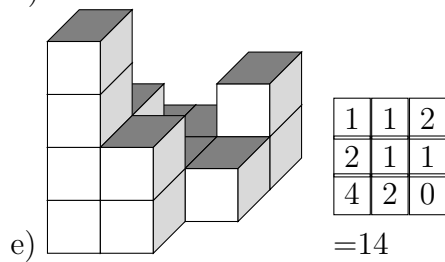
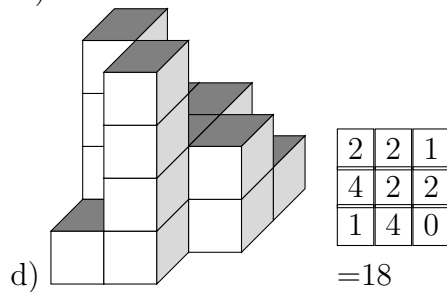
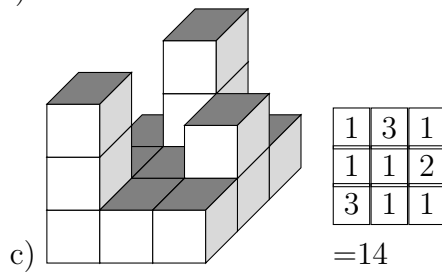
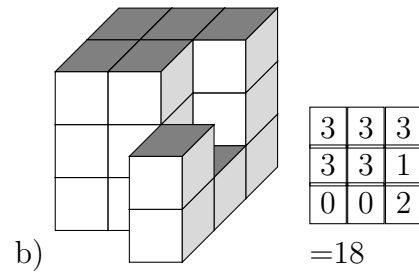
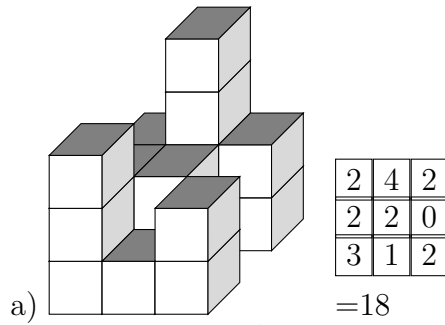
07/31/2018

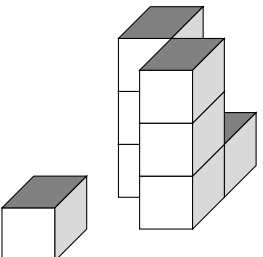
Free on dw-math.com

Problem quickname: 3555

1)

How many cubes is this building made of?

Quick:
3555

f) 

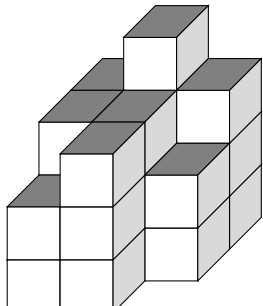
0	3	1
0	0	3
1	0	0

=8

2)

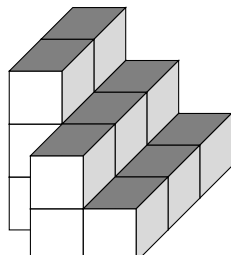
How many cubes is this building made of?

Quick:
3555

a) 

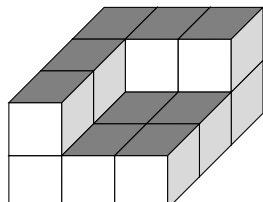
3	4	3
3	3	2
2	3	0

=23

b) 

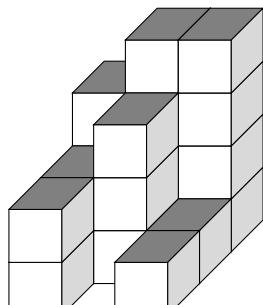
3	2	1
3	2	1
0	2	1

=15

c) 

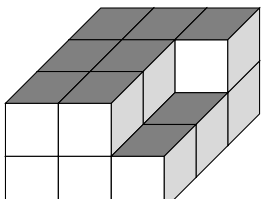
2	2	2
2	1	1
2	1	1

=14

d) 

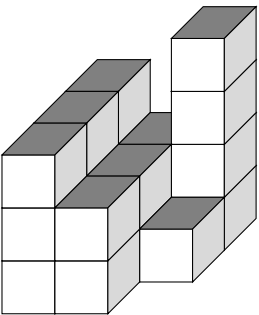
3	4	4
2	3	1
2	0	1

=20

e) 

2	2	2
2	2	1
2	2	1

=16

f) 

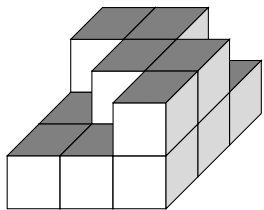
3	2	4
3	2	1
3	2	0

=20

3)

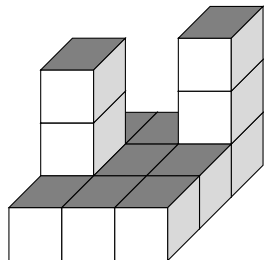
How many cubes is this building made of?

Quick:
3555

a) 

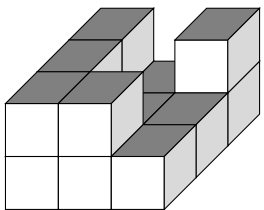
2	2	1
1	2	2
1	1	2

=14

b) 

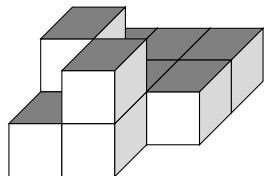
1	1	3
3	1	1
1	1	1

=13

c) 

2	1	2
2	1	1
2	2	1

=14

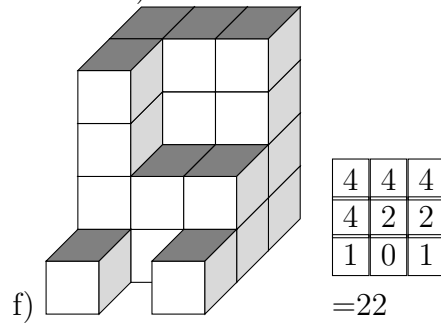
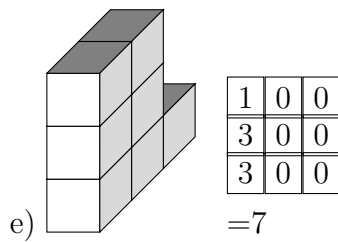
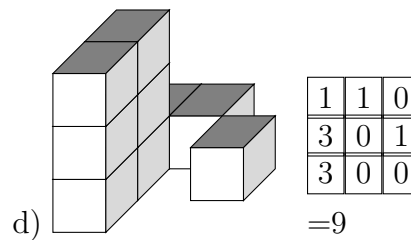
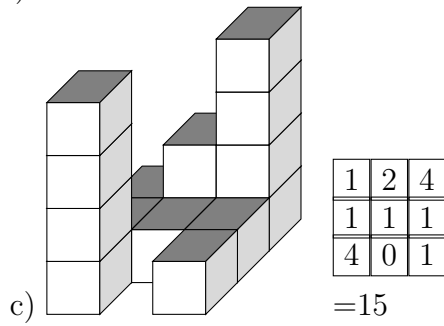
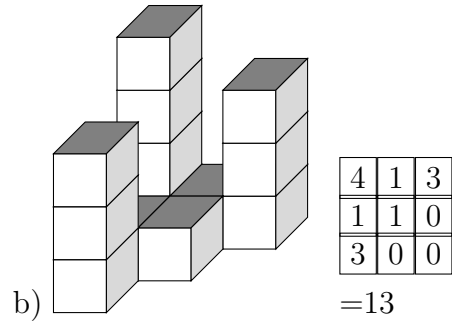
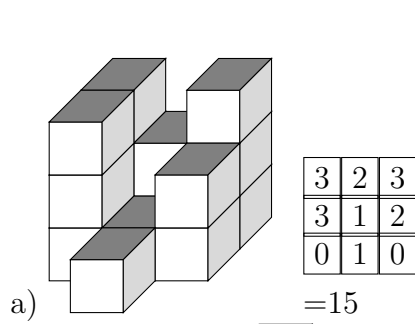
d) 

1	1	1
2	1	1
1	2	0

=10

4)

How many cubes is this building made of?



Good Luck!