

Worksheet

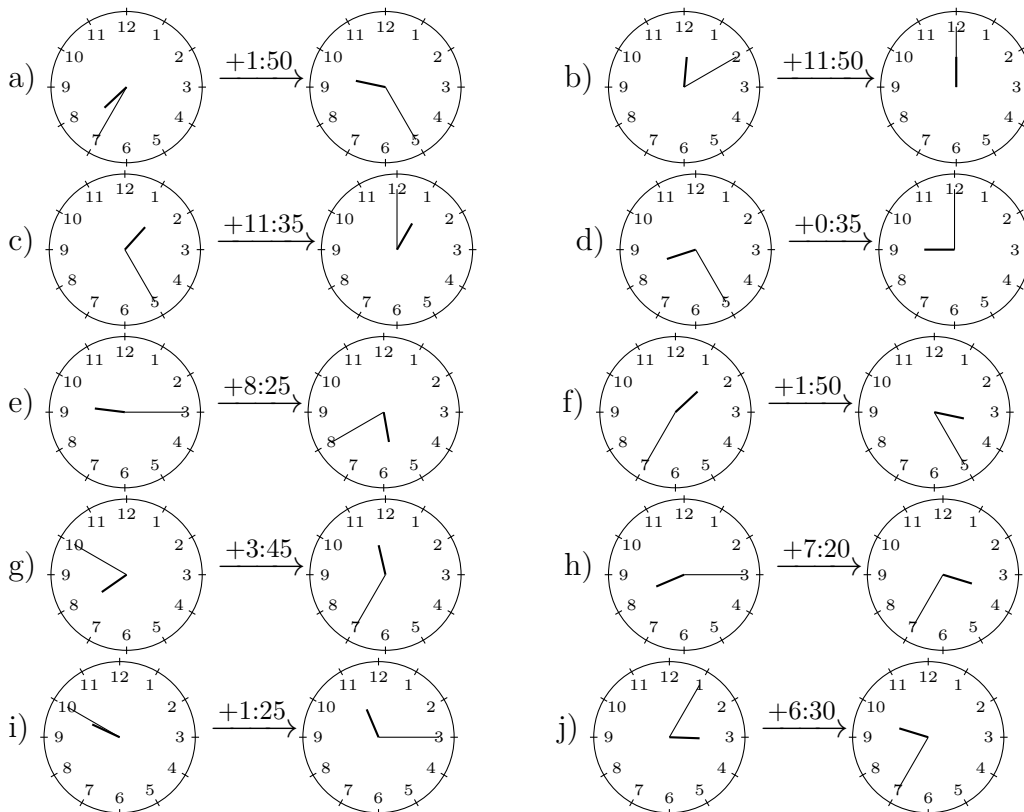
11/16/2018

Free on dw-math.com

Problem quickname: 5329

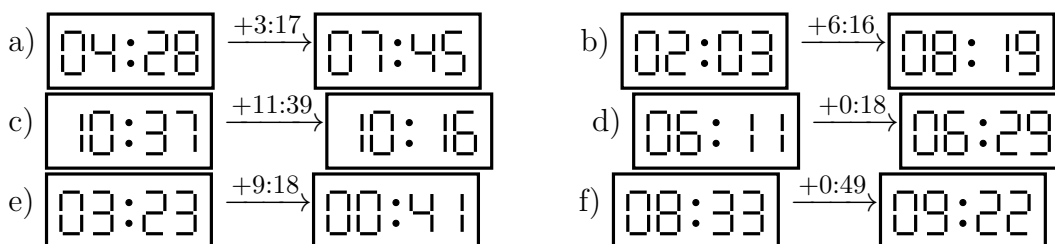
1)

How much time has passed between the time shown on the left clock and the time shown on the right clock?

Quick:
5329

2)

How much time has passed between the time shown on the left clock and the time shown on the right clock?

Quick:
5329


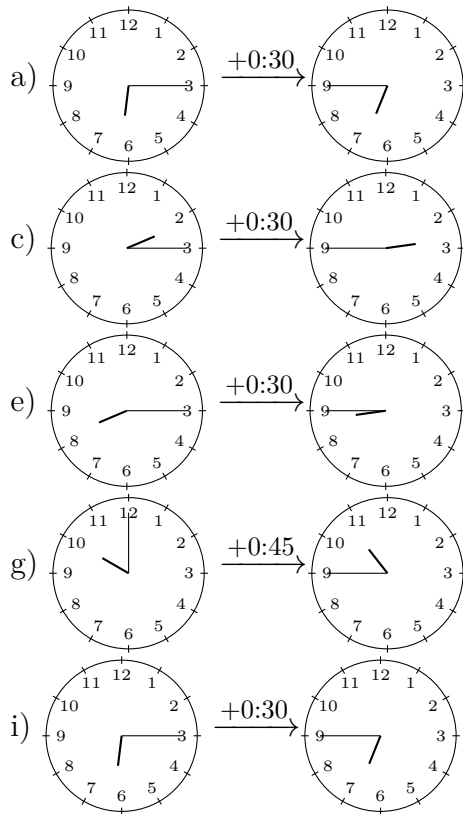
g) $\boxed{09:00} \xrightarrow{+1:37} \boxed{10:37}$
 i) $\boxed{04:46} \xrightarrow{+0:24} \boxed{05:10}$

h) $\boxed{02:22} \xrightarrow{+11:16} \boxed{01:38}$
 j) $\boxed{05:38} \xrightarrow{+5:39} \boxed{11:17}$

3)

How much time has passed between the time shown on the left clock and the time shown on the right clock?

Quick:
5329



4)

How much time has passed between the time shown on the left clock and the time shown on the right clock?

Quick:
5329

a) $\boxed{07:15} \xrightarrow{+6:04} \boxed{01:19}$
 c) $\boxed{08:24} \xrightarrow{+10:18} \boxed{06:42}$
 e) $\boxed{05:48} \xrightarrow{+11:13} \boxed{05:01}$
 g) $\boxed{07:26} \xrightarrow{+6:53} \boxed{02:19}$

b) $\boxed{03:49} \xrightarrow{+4:10} \boxed{07:59}$
 d) $\boxed{01:10} \xrightarrow{+8:48} \boxed{09:58}$
 f) $\boxed{04:12} \xrightarrow{+7:43} \boxed{11:55}$
 h) $\boxed{08:14} \xrightarrow{+9:08} \boxed{05:22}$

i) $\boxed{10:12} \xrightarrow{+4:55} \boxed{03:07}$

j) $\boxed{09:21} \xrightarrow{+3:09} \boxed{00:30}$

Good Luck!