

Worksheet

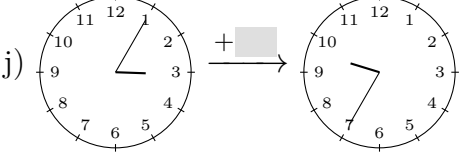
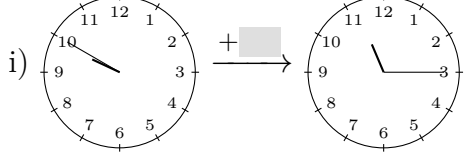
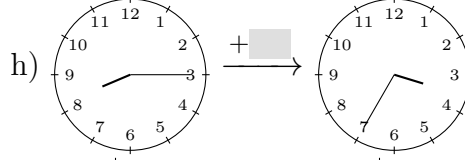
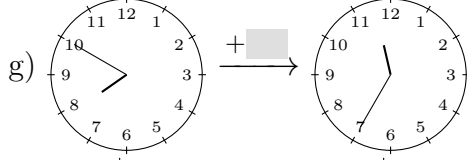
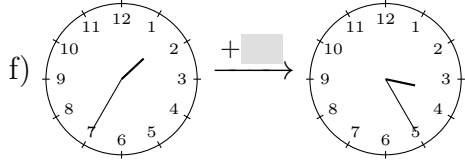
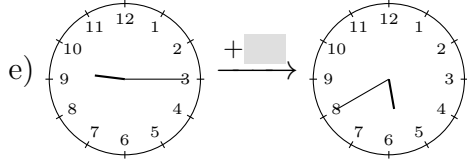
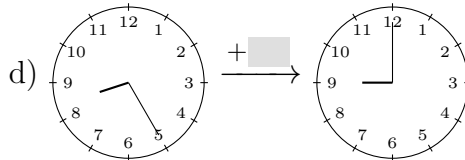
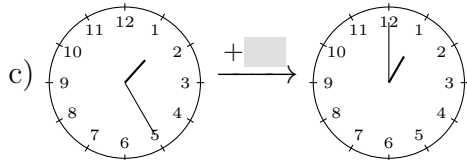
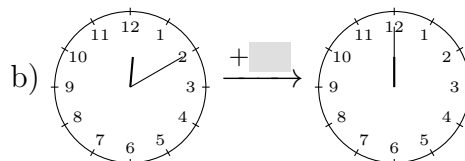
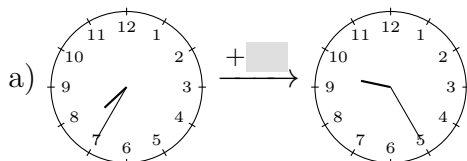
11/16/2018

Free on dw-math.com

Problem quickname: 5329

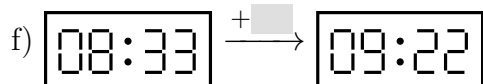
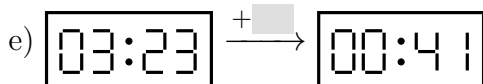
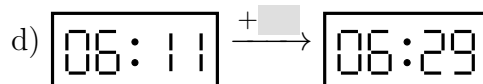
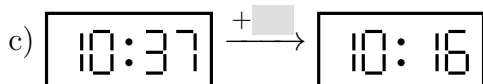
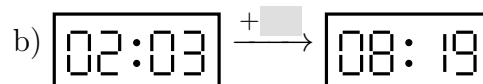
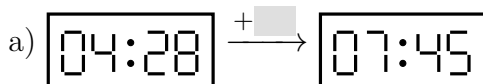
1)

How much time has passed between the time shown on the left clock and the time shown on the right clock?



2)

How much time has passed between the time shown on the left clock and the time shown on the right clock?

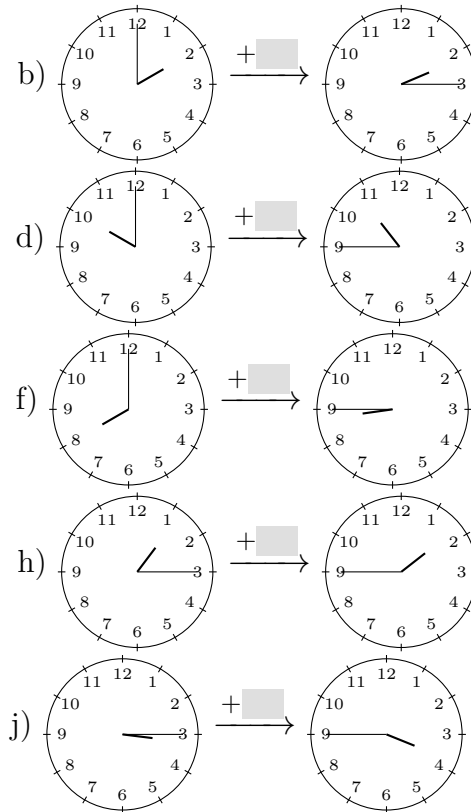
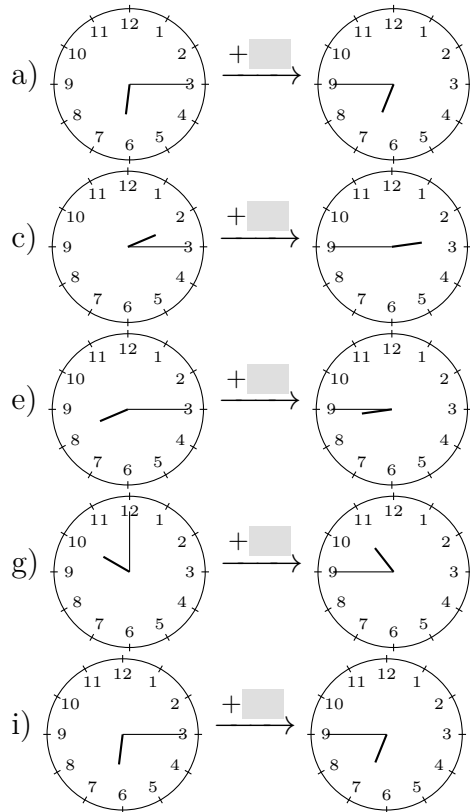


g) $\boxed{09:00} \xrightarrow{+ \square} \boxed{10:37}$
 i) $\boxed{04:46} \xrightarrow{+ \square} \boxed{05:10}$

h) $\boxed{02:22} \xrightarrow{+ \square} \boxed{01:38}$
 j) $\boxed{05:38} \xrightarrow{+ \square} \boxed{11:17}$

3)

How much time has passed between the time shown on the left clock and the time shown on the right clock?



4)

How much time has passed between the time shown on the left clock and the time shown on the right clock?

a) $\boxed{07:15} \xrightarrow{+ \square} \boxed{01:19}$
 c) $\boxed{08:24} \xrightarrow{+ \square} \boxed{06:42}$
 e) $\boxed{05:48} \xrightarrow{+ \square} \boxed{05:01}$
 g) $\boxed{07:26} \xrightarrow{+ \square} \boxed{02:19}$

b) $\boxed{03:49} \xrightarrow{+ \square} \boxed{07:59}$
 d) $\boxed{01:10} \xrightarrow{+ \square} \boxed{09:58}$
 f) $\boxed{04:12} \xrightarrow{+ \square} \boxed{11:55}$
 h) $\boxed{08:14} \xrightarrow{+ \square} \boxed{05:22}$

i) $\boxed{10:12} + \boxed{} \rightarrow \boxed{03:07}$

j) $\boxed{09:21} + \boxed{} \rightarrow \boxed{00:30}$

Good Luck!