

Worksheet

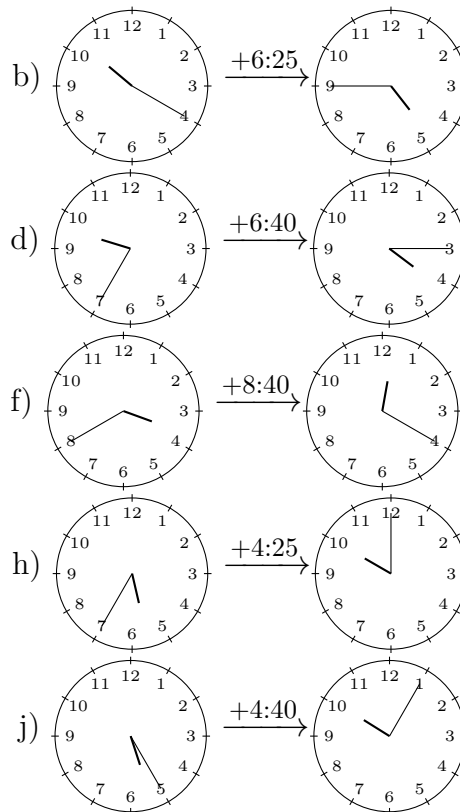
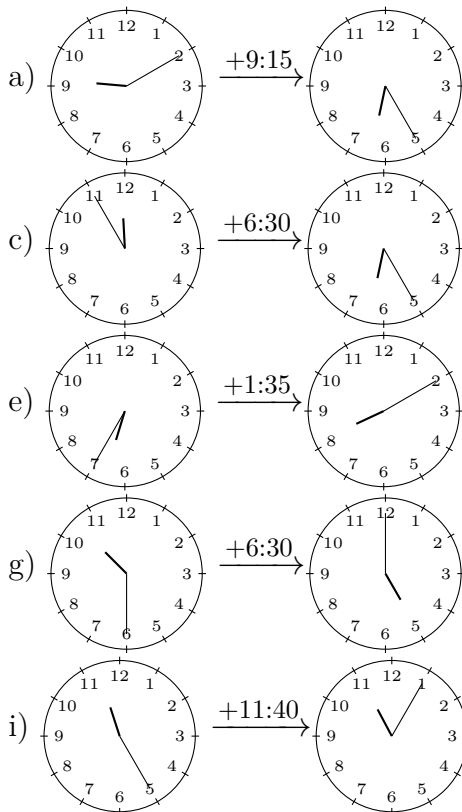
01/23/2019

Free on dw-math.com

Problem quickname: 5977

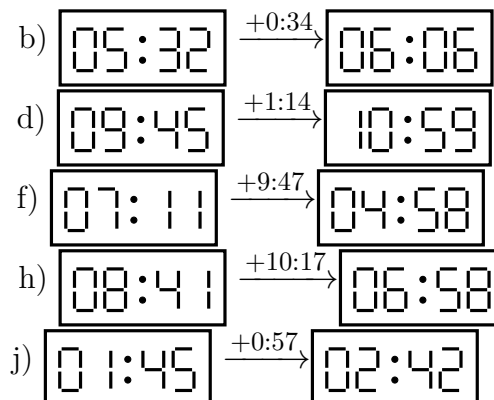
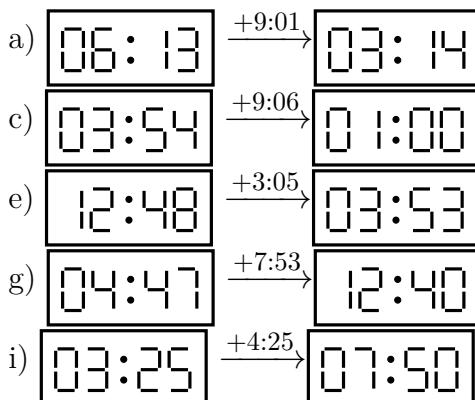
1)

Draw the clock's hands to show the correct time before the period of time indicated had passed.

Quick:
5977

2)

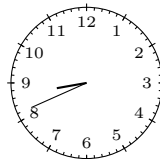
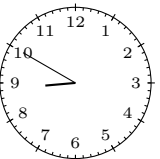
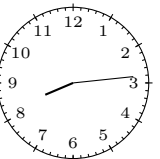

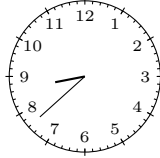
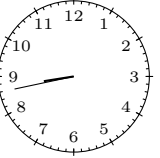
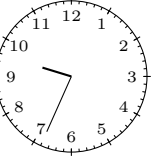
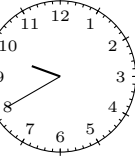
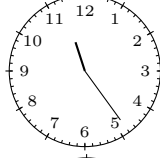
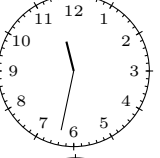
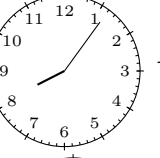

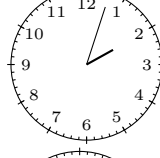
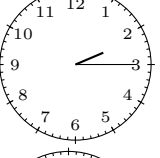
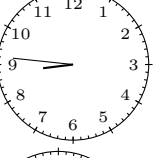
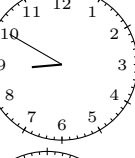


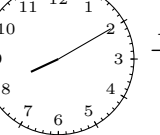

What time was shown on the display before the period of time indicated had passed?

Quick:
5977

3)

Quick:
5977

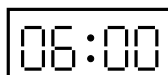
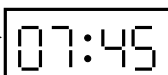
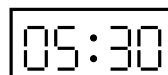
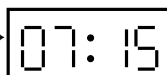

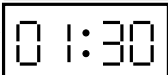
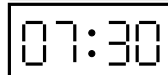









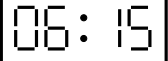
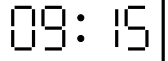
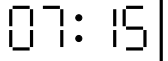
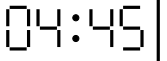
What time was shown on the display before the period of time indicated had passed?

a)		$\xrightarrow{+0:09}$		b)		$\xrightarrow{+0:19}$	
c)		$\xrightarrow{+0:05}$		d)		$\xrightarrow{+0:06}$	
e)		$\xrightarrow{+0:08}$		f)		$\xrightarrow{+0:44}$	
g)		$\xrightarrow{+0:12}$		h)		$\xrightarrow{+0:04}$	
i)		$\xrightarrow{+0:05}$		j)		$\xrightarrow{+0:23}$	

4)

Quick:
5977

What time was shown on the display before the period of time indicated had passed?

a)		$\xrightarrow{+1:45}$		b)		$\xrightarrow{+1:45}$	
c)		$\xrightarrow{+5:30}$		d)		$\xrightarrow{+1:30}$	
e)		$\xrightarrow{+1:30}$		f)		$\xrightarrow{+1:00}$	
g)		$\xrightarrow{+8:30}$		h)		$\xrightarrow{+10:30}$	
i)		$\xrightarrow{+3:00}$		j)		$\xrightarrow{+9:30}$	

Good Luck!