

Worksheet

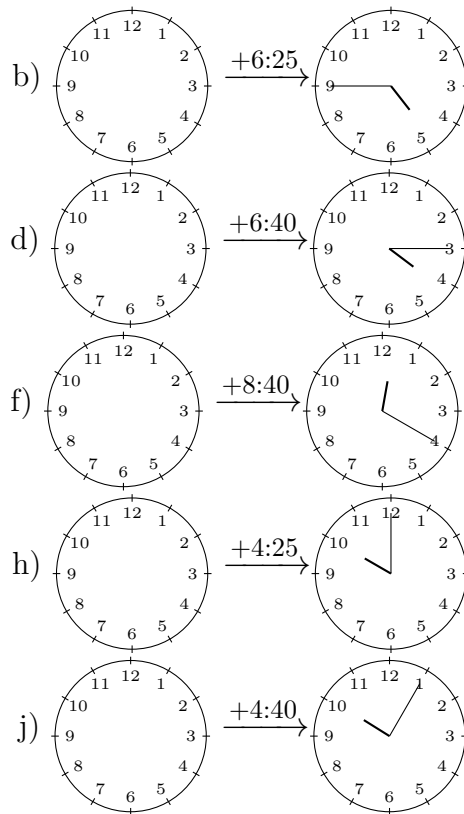
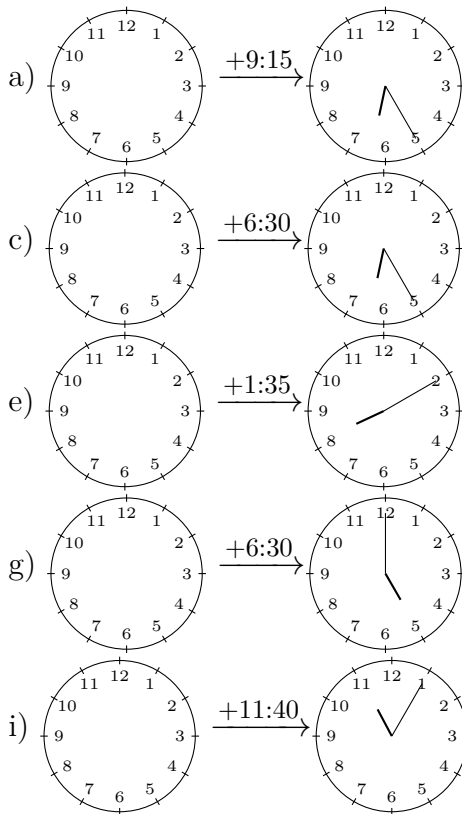
01/23/2019

Free on dw-math.com

Problem quickname: 5977

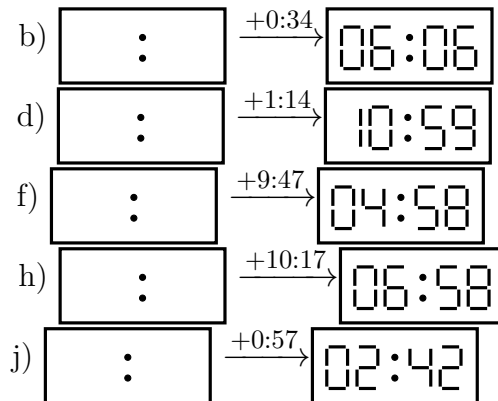
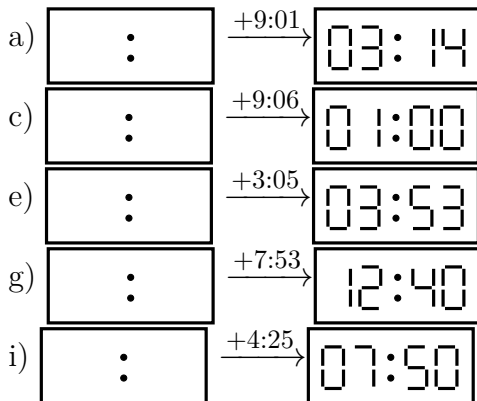
1)

Draw the clock's hands to show the correct time before the period of time indicated had passed.



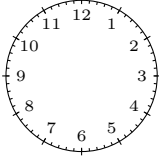
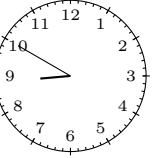
2)

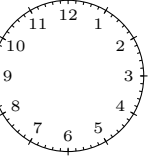

What time was shown on the display before the period of time indicated had passed?

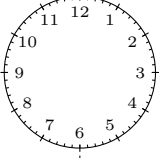
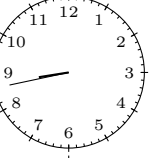


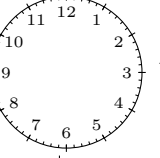
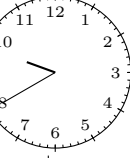
3)

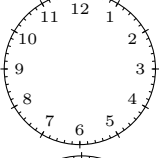
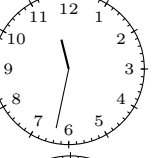
What time was shown on the display before the period of time indicated had passed?

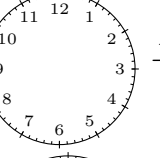

a)  $\xrightarrow{+0:09}$ 

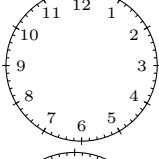
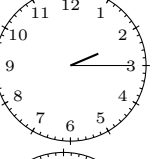
b)  $\xrightarrow{+0:19}$ 

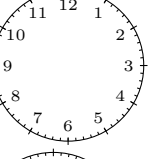
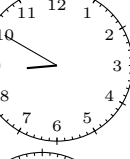
c)  $\xrightarrow{+0:05}$ 

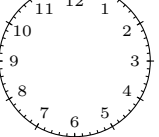

d)  $\xrightarrow{+0:06}$ 



e)  $\xrightarrow{+0:08}$ 

f)  $\xrightarrow{+0:44}$ 

g)  $\xrightarrow{+0:12}$ 


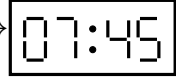
h)  $\xrightarrow{+0:04}$ 



i)  $\xrightarrow{+0:05}$ 


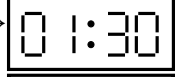
j)  $\xrightarrow{+0:23}$ 



4)


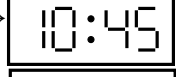
What time was shown on the display before the period of time indicated had passed?

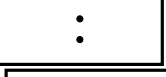
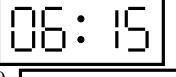
a)  $\xrightarrow{+1:45}$ 

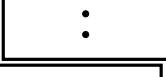

b)  $\xrightarrow{+1:45}$ 

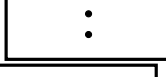
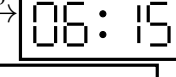
c)  $\xrightarrow{+5:30}$ 



d)  $\xrightarrow{+1:30}$ 


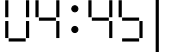
e)  $\xrightarrow{+1:30}$ 

f)  $\xrightarrow{+1:00}$ 

g)  $\xrightarrow{+8:30}$ 

h)  $\xrightarrow{+10:30}$ 

i)  $\xrightarrow{+3:00}$ 

j)  $\xrightarrow{+9:30}$ 

Good Luck!