

Worksheet

07/14/2019

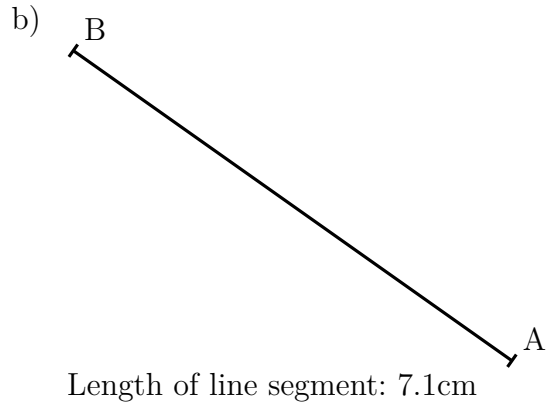
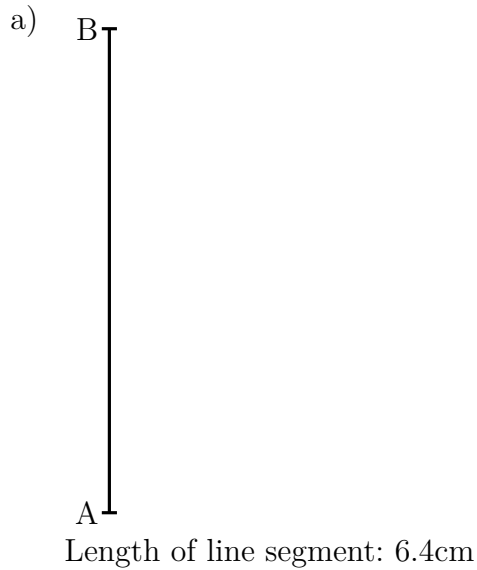
Free on dw-math.com

Problem quickname: 9230

1)

Measure the length of the line segment exactly to the millimetre.

Quick:
9230



d)



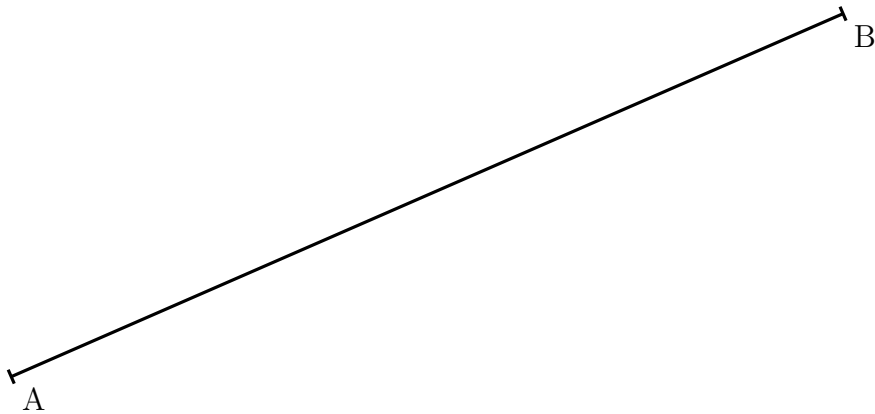
Length of line segment: 8.4cm

2)

Measure the length of the line segment exactly to the millimetre.

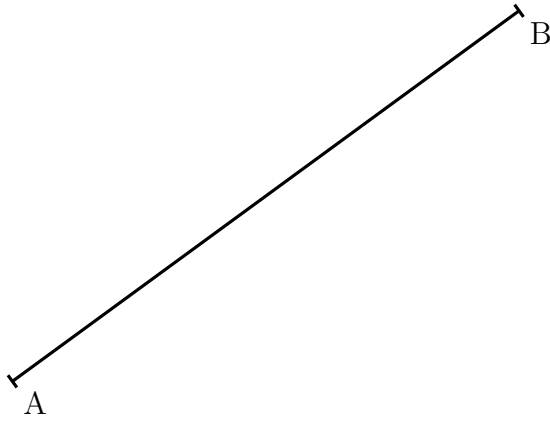
Quick:
9230

a)




Length of line segment: 12cm

b)



Length of line segment: 8.3cm

c)



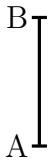
Length of line segment: 8.5cm

3)

Measure the length of the line segment exactly to the millimetre.


Quick:
9230

a)



Length of line segment: 1.7cm

b)



Length of line segment: 2.4cm

c)



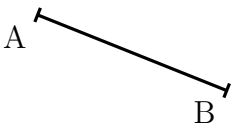
Length of line segment: 3.1cm

d)



Length of line segment: 3.5cm

e)



Length of line segment: 2.7cm

f)



Length of line segment: 2.6cm

4)

Measure the length of the line segment exactly to the millimetre.

Quick:
9230

a)





Length of line segment: 4.2cm


b)




Length of line segment: 4.6cm

c) 
Length of line segment: 3.8cm

e) 
Length of line segment: 4.5cm

d) 
Length of line segment: 4.1cm

f) 
Length of line segment: 4cm

Good Luck!